

Mathematics

تقييمات الأضواء

لشهر مارس

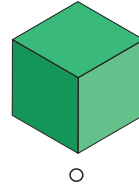

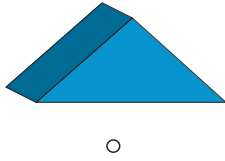
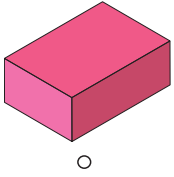


الفصل الدراسي الثاني
Primary
1

2026

Model 1

1 Join each shape to its name:



○
Ball


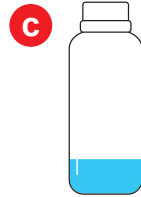
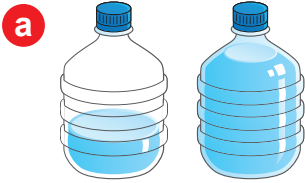
○
Cylinder

○
Prism

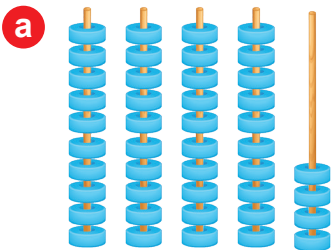
○
Cuboid

○
Cube

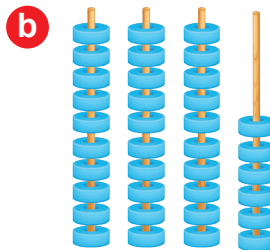
2 Circle the one that has more water:



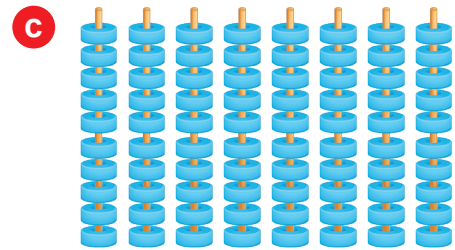
3 Count, then write the number:



.....



.....



.....

4 Solve each of the following:

a $8 + 3 = \dots\dots$

b $8 + 7 = \dots\dots$

c $11 - 7 = \dots\dots$

d $16 - 8 = \dots\dots$

e $9 + 9 = \dots\dots$

f $17 - 9 = \dots\dots$

Model 2

1 Match:

3 tens and 2 ones

1 ten and 7 ones

3 tens and 9 ones

4 tens and 5 ones

4 tens and 8 ones

17

32

45

48

39

2 Choose the correct answer:

a $19 - 9 = \dots\dots\dots$

(10 - 11 - 9)

b $7 + 5 = \dots\dots\dots$

(11 - 12 - 13)

c $8 + 6 = 10 + \dots\dots\dots$

(4 - 6 - 8)

d $6 + 9 = \dots\dots\dots$

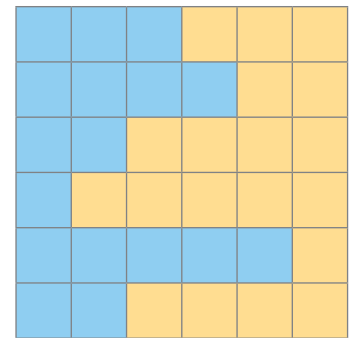
(14 - 15 - 16)

3 From the opposite shape, Answer:





a How many units of blue color?





b How many units of orange color?





c Which color has a larger area?

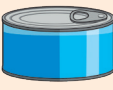





4 Circle the shape which is related to the given object:

a    

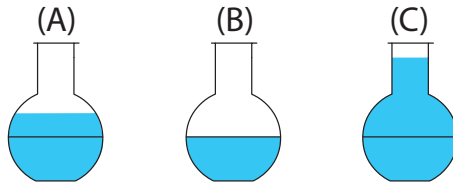
b    

c    

d    

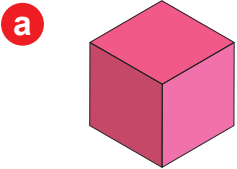
Model 3

1 Arrange the following cups from most to least amount of water:

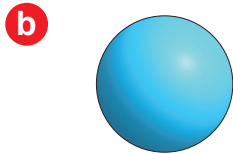


The order:,,

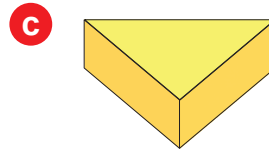
2 Write the name of each shape:



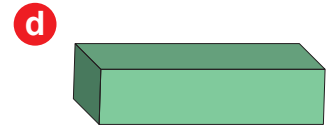
.....



.....

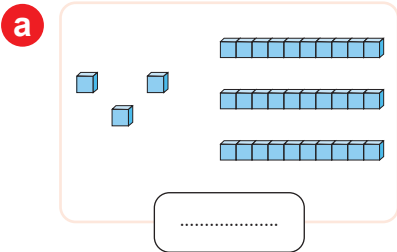


.....

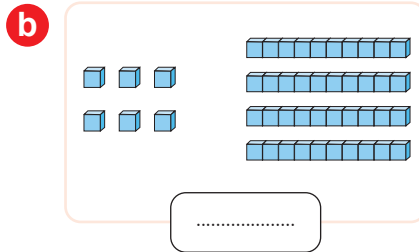


.....

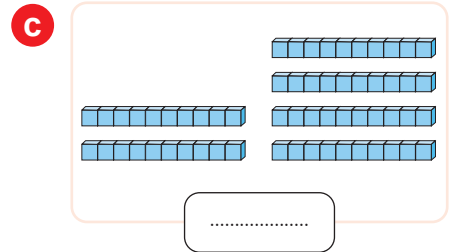
3 Count, then write the number:



.....



.....



.....

4 Match the same result:

$18 - 7 = \dots\dots\dots$

$16 - 7 = \dots\dots\dots$

$10 + 7 = \dots\dots\dots$

$10 + 3 = \dots\dots\dots$

$9 + 4 = \dots\dots\dots$

$9 + 8 = \dots\dots\dots$

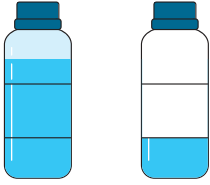
$6 + 5 = \dots\dots\dots$

$18 - 9 = \dots\dots\dots$

Model 4


1 Circle according the required:

a



The bottle with more water

b



The cup with less amount of juice

c



The shape with larger area

2 Write the missing number:

a

5 and 40 make

b

8 groups of 10 make

c

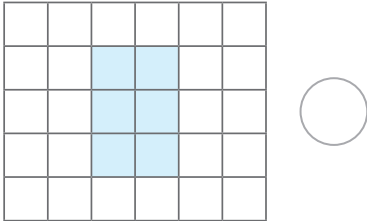
30 and make 36

d

Seventeen minus eight equal

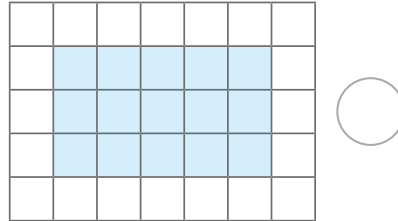
3 Write the area of each shape and put ✓ to the larger:

a



The area =

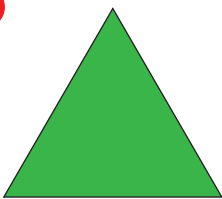
b



The area =


4 Write the name of each shape:

a




.....

b




.....

c



.....

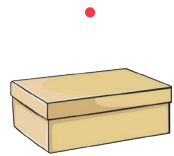

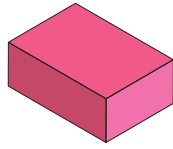
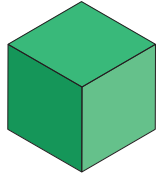
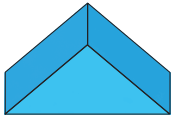
d



.....

Model 5

1 Match to the correct shape:



2 Arrange by area from the smallest to the greatest:

(A)



(B)



(C)



The order:,,

3 Choose the correct answer:

a 7 tens and 3 ones make (37 - 73 - 40)

b 7 groups of 10 make (7 - 10 - 70)

c $16 - 7 =$ (7 - 8 - 9)

d $9 + 8 = 10 +$ (7 - 8 - 9)

4 Read and answer:

► Mohamed has 8 balloons and bought 7 more balloons. What is the total number of balloons Mohamed has?

Addition sentence:

Answer: balloons

Mathematics

إجابات تقييمات الأضواء

لشهر مارس

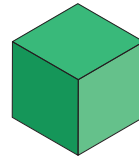
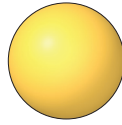
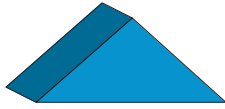
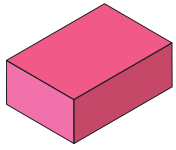


الفصل الدراسي الثاني
Primary
1

2026

Model 1

1 Join each shape to its name:



Ball

Cylinder

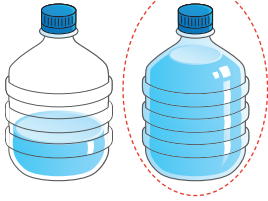
Prism

Cuboid

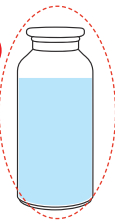
Cube

2 Circle the one that has more water:

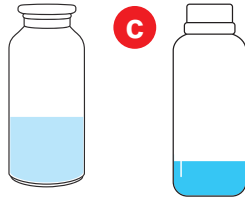
a




b



c

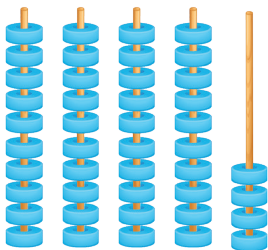


d



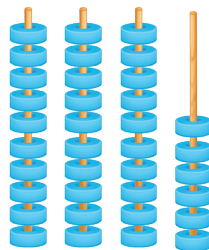
3 Count, then write the number:

a



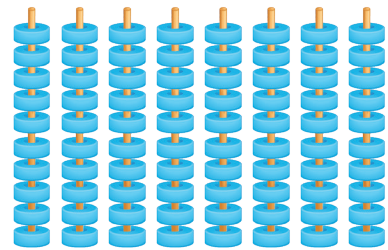
44

b



36

c



80

4 Solve each of the following:

a $8 + 3 = 11$

b $8 + 7 = 15$

c $11 - 7 = 4$

d $16 - 8 = 8$

e $9 + 9 = 18$

f $17 - 9 = 8$

Model 2

1 Match:

3 tens and 2 ones

1 ten and 7 ones

3 tens and 9 ones

4 tens and 5 ones

4 tens and 8 ones

17

32

45

48

39

2 Choose the correct answer:

a $19 - 9 = \dots\dots\dots$

(10 - 11 - 9)

b $7 + 5 = \dots\dots\dots$

(11 - 12 - 13)

c $8 + 6 = 10 + \dots\dots\dots$

(4 - 6 - 8)

d $6 + 9 = \dots\dots\dots$

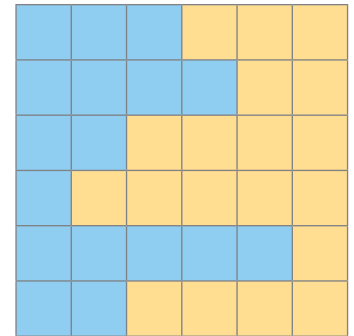
(14 - 15 - 16)

3 From the opposite shape, Answer:

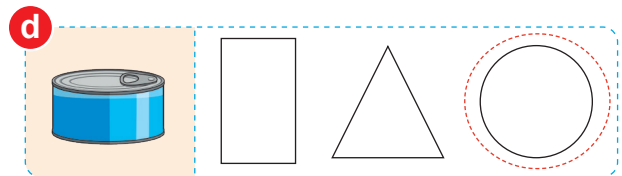
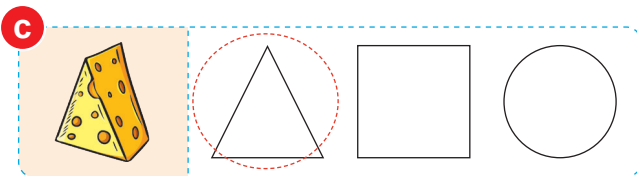
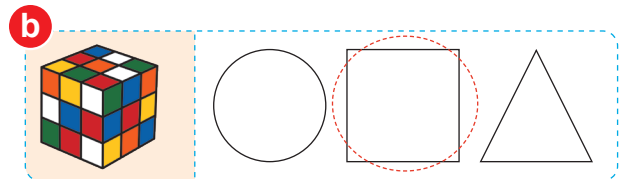
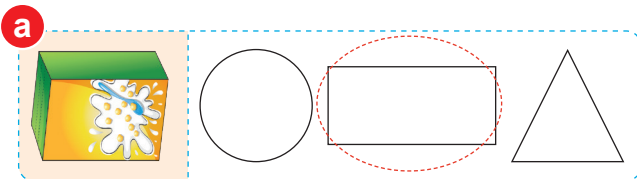
a How many units of blue color? 17

b How many units of orange color? 19

c Which color has a larger area? Orange

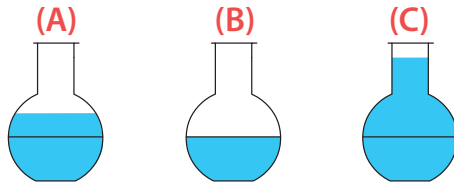


4 Circle the shape which is related to the given object:



Model 3

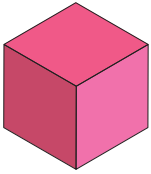
1 Arrange the following cups from most to least amount of water:



The order: (C), (A), (B)


2 Write the name of each shape:

a



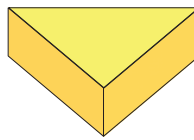
Cube

b



Ball

c



Prism

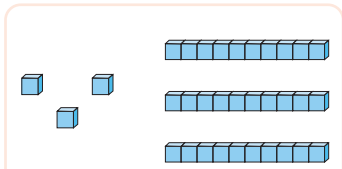
d



Cuboid

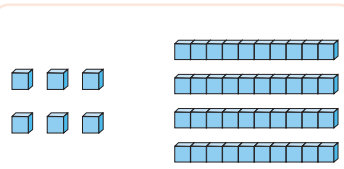
3 Count, then write the number:

a



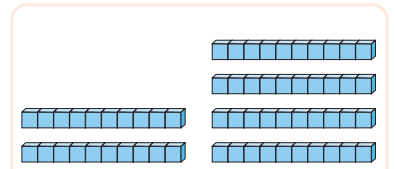
33

b



46

c



60

4 Match the same result:

$$18 - 7 = 11$$

$$16 - 7 = 9$$

$$10 + 7 = 17$$

$$10 + 3 = 13$$

$$9 + 4 = 13$$

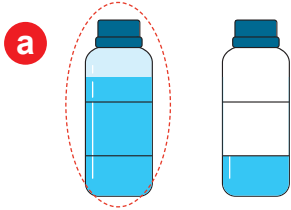
$$9 + 8 = 17$$

$$6 + 5 = 11$$


$$18 - 9 = 9$$

Model 4

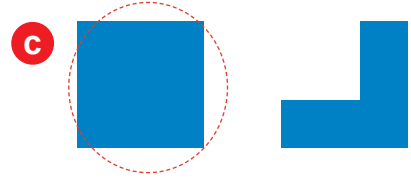
1 Circle according the required:



The bottle with more water



The cup with less amount of juice



The shape with larger area

2 Write the missing number:

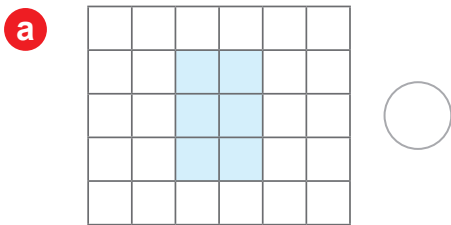
a 5 and 40 make 45

b 8 groups of 10 make 80

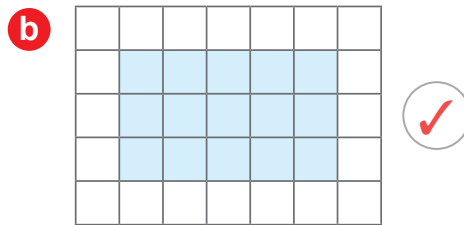
c 30 and 6 make 36

d Seventeen minus eight equal 9

3 Write the area of each shape and put ✓ to the larger:




The area = 6




The area = 15

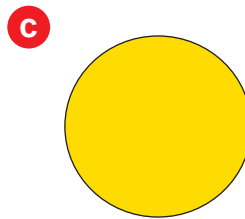
4 Write the name of each shape:



Triangle



Square



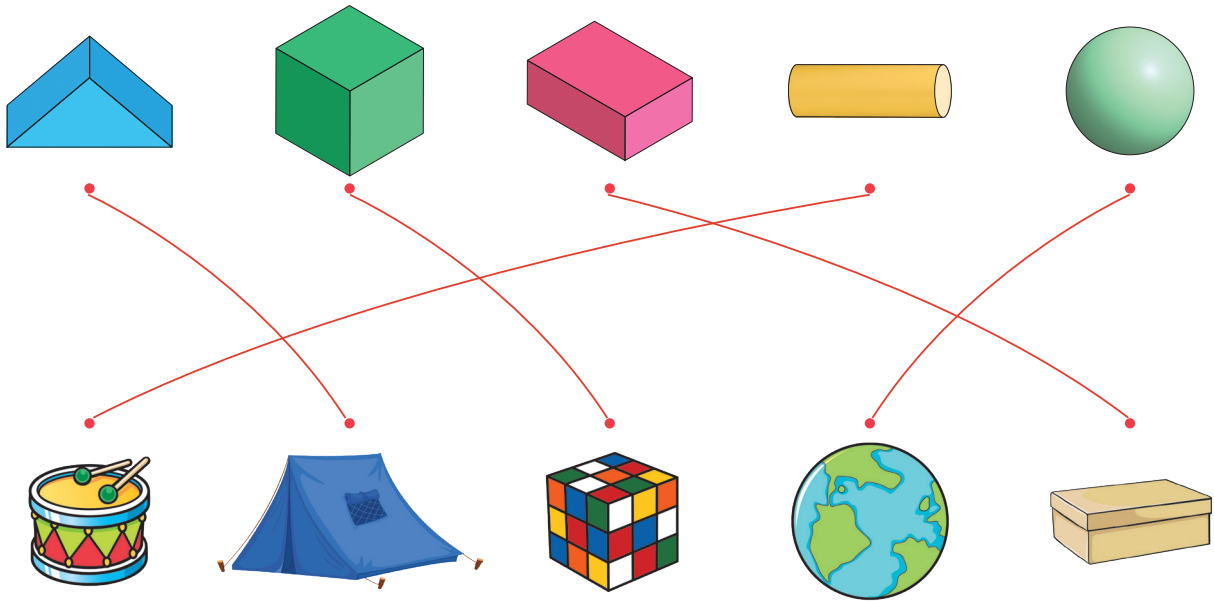
Circle




Rectangle

Model 5

1 Match to the correct shape:



2 Arrange by area from the smallest to the greatest:



The order: (B), (C), (A)

3 Choose the correct answer:

- a 7 tens and 3 ones make (37 - 73 - 40)
- b 7 groups of 10 make (7 - 10 - 70)
- c $16 - 7 =$ (7 - 8 - 9)
- d $9 + 8 = 10 +$ (7 - 8 - 9)

4 Read and answer:

► Mohamed has 8 balloons and bought 7 more balloons. What is the total number of balloons Mohamed has?

Addition sentence: $8 + 7 = 15$

Answer: 15 balloons

تطبيق



مذكرات جاهزة للطباعة

لتحميل الملفات التعليمية مجاناً للمعلم والطالب

مذكرات وملازم / مراجعات وملخصات / امتحانات / كتب الوزارة /
أدلة المعلم / دفاتر التحضير / سجلات مدرسية / أوراق تأسيس

امسح الكود بموبايلك علشان تقدر تثبت التطبيق

وتقدر ف أي وقت تحمّل ال نفسك فيه ببلاش

هيغنيك عن البحث والجروبات والقنوات الكثيرة



تطبيق الموبايل لتحميل الملفات

تطبيق



مذكرات جاهزة للطباعة

لتحميل الملفات التعليمية مجاناً للمعلم والطالب

مذكرات وملازم / مراجعات وملخصات / امتحانات / كتب الوزارة /
أدلة المعلم / دفاتر التحضير / سجلات مدرسية / أوراق تأسيس

امسح الكود بموبايلك علشان تقدر تثبت التطبيق

وتقدر ف أي وقت تحمّل ال نفسك فيه ببلاش

هيغنيك عن البحث والجروبات والقنوات الكثيرة



تطبيق الموبايل لتحميل الملفات

تطبيق



مذكرات جاهزة للطباعة

لتحميل الملفات التعليمية مجاناً للمعلم والطالب

مذكرات وملازم / مراجعات وملخصات / امتحانات / كتب الوزارة /
أدلة المعلم / دفاتر التحضير / سجلات مدرسية / أوراق تأسيس

امسح الكود بموبايلك علشان تقدر تثبت التطبيق

وتقدر ف أي وقت تحمّل ال نفسك فيه ببلاش

هيغنيك عن البحث والجروبات والقنوات الكثيرة

