

2025 Educational Series

Alkhawarizmi



Final Revision

Discover



Belal Nasr
01065760483

1

Primary one
Second Term

الزملاء والزميلات الأعزاء

أولياء الأمور الافاضل - ابنائي وبناتي الطلاب

يسعدني أن اقدم هذا العمل المتواضع

وللعلم هذه النسخة اصدار عام ٢٠٢٤ -

٢٠٢٥ م وغير مسموح بالتعديل على

المحتوى الا بعد الرجوع لي شخصياً من خلال

التواصل على رقم ٠١٠٦٥٧٦٠٤٨٣

وأنا غير مسامح لأي شخص يقوم بحذف

بياناتي او ازلتها بدون الرجوع الي اولاً

خالص تحياتي سلسلة الخوارزمي (اكتشف -

Discover - تكنولوجيا المعلومات والاتصالات

ICT عام ولغات - المهارات المهنية) لحجز

وحضور شرح الحصص أونلاين للمرحلة الابتدائية

والاعدادية تواصل على رقمي- بلال نصر..

Question 2: Choose the correct answer :-

1- We find it in the grocery store.

A- Food

B- Clothes

C- Toys

2- We find it in the bookstore.

A- Books

B- Food

C- Hygiene

3- We find it in the pharmacy.

A- Books

B- Food

C- Hygiene

Lesson 3 Questions : MATERIALS MAZE

Question 1 : Put (✓) or (×):-

1- The chair is made of wheat.

()

2- Clay pots are made of clay.

()

3- Clothes are made of cotton.

()

Question 2: Choose the correct answer :-

1- We make from wheat

A- Chairs

B- Clothes

C- Bread

2- It is produced from cotton

A- Chairs

B- Clothes

C- Bread

3- It is produced from trees

A- Wooden chairs

B- Clothes

C- Pottery

4- The first stage of making clothes is

A- Cotton

B- Manufacture

C- Buy

Lesson 4 Questions : THROW AWAY OR RECYCLE CLOTHING?

Question 1 : Put (✓) or (×):-

- 1- It is better to get rid of old clothes by throwing them in the trash. ()
- 2- It is better to recycle old clothes. ()
- 3- You can donate old clothes to someone else. ()
- 4- It is better to repair old clothes. ()

Question 2: Choose the correct answer :-

1- It is better to old clothes.

A- Burn B- Throw C- Recycle

2- It is possible with old clothes to someone else.

A- Donate B- Sell C- Tear

Lesson 5 Questions : TECHNOLOGY AND THE T-SHIRT

Question 1 : Put (✓) or (×):-

- 1- Planting cotton in fields. ()
- 2- Cotton is collected by machines. ()
- 3- We separate the cotton seeds with a cotton collecting machine. ()
- 4- We separate the cotton seeds with a cotton harvesting machine. ()

Question 2: Choose the correct answer :-

1- Planting cotton in..... .

A- Fields B- Factories C- Stores

2- Cotton is collected by

A- Planes B- Machines C- Computer

3- We separate the cotton seeds by

A- Cotton picking machine
B- Cotton ginning machine
C- Cotton spinning machine

4- To convert cotton into cloth, cotton is used.

A- Spinning and weaving B- Planting C- Separating the seeds

Lesson 6 Questions : APPLIANCES

Question 1 : Put (✓) or (×):-

- 1- The fan is used to cool the air. ()
- 2- The washing machine is used to Keep food cold. ()
- 3- The stove is used to heat food. ()
- 4- The washing machine is used to clean clothes. ()
- 5- The computer is used to find information. ()
- 6- The refrigerator is used to Keep food cold. ()
- 7- The refrigerator is used to clean clothes. ()

Question 2: Choose the correct answer :-

1- is used to cool the air.

A- Stove

B- Fan

C- Refrigerator

2- is used to Keep food cold.

A- Stove

B- Fan

C- Refrigerator

3- is used to heat food.

A- Stove

B- Fan

C- Refrigerator

4- is used to find information.

A- Stove

B- Computer

C- Refrigerator

5- is used to clean clothes.

A- Washing machine

B- Fan

C- Refrigerator

Lesson 7 Questions : CONSERVING WATER

Question 1 : Put (✓) or (×):-

1- The tap must be closed after use. ()

2- The plant must be watered when necessary. ()

3- Water leaks must be repaired. ()

Question 2: Choose the correct answer :-

1- I pledge to keep in my house.

A- Time

B- Water

C- Air

2- Water leaks must be

A- fixed.

B- Leave

C- Ignore

المحور ٣ : كيف يعمل العالم من حولي ؟
الفصل الثاني : كيفية القيام بالأعمال؟

Chapter 2: HOW BUSINESS WORKS?

Lesson 1 Questions : AT WORK

Question 1 : Put (✓) or (✗):-

- 1- The butcher cuts meat with a knife. ()
- 2- The teller works in the bakery. ()
- 3- The teller types the money into the computer. ()
- 4- The baker works in the bank. ()
- 5- A mechanic works at the garage. ()
- 6- The mechanic uses a funnel to change the oil. ()

Question 2: Choose the correct answer :-

- 1- The butcher works in
A- A Meat market B- A bank C- A bakery
- 2- The butcher's tools are
A- Knife B- Oven C- Computer
- 3- The butcher uses to weigh meat
A- Knife B- Scale C- Computer
- 4- works in the bank
A- Teller B- Butcher C- Baker
- 5- The teller types amounts of money into the
A- Knife B- Scale C- Computer

6- A baker works at the

A- Bakery B- Bank C- Bakery

7- The baker puts the bread in the to cook.

A- Oven B- Scale C- Computer

8- works at the garage.

A- Mechanic B- Butcher C- Baker

9- The mechanic changes a tire with a

A- Wrench B- Knife C- Scale

Lesson 2 Questions : TYPES OF TRANSPORTATION

Question 1 : Put (✓) or (×):-

1- The plane is used to transport people. ()

2- We use the bus to transport goods. ()

Question 2: Choose the correct answer :-

1- Large trucks are used to transport

A- Students B- people C- goods

We use the bus to transport

A- Meat B- people C- goods

Lesson 3 Questions : DOES IT ATTRACT?

Question 1 : Put (✓) or (✗):-

- 1- All objects are attracted to a magnet. ()
- 2- There are some objects that are not attracted to a magnet. ()
- 3- Nails are attracted to a magnet. ()
- 4- Plastic is attracted to a magnet. ()
- 5- Wood is not attracted to a magnet. ()
- 6- A compass is used to determine directions. ()

Question 2: Choose the correct answer:-

- 1- is an object that only metals are attracted to.
A- vacuum cleaner B- Refrigerator C- Magnet
- 2- is attracted to a magnet.
A- Paper clip B- Plastic ball C- Paper
- 3- is not attracted to a magnet.
A- Plastic B- Nail C- Pin
- 4- A tool used to determine directions.
A- Compass B- Refrigerator C- Washing machine

Lesson 4 Questions : A TOURIST FOR A DAY

Question 1 : Put (✓) or (✗):-

- 1- You can go to the bakery in the morning. ()
- 2- The tourist can visit my city for one day. ()
- 3- The tourist eats at the Souvenir Store. ()

Question 2: Choose the correct answer:-

1- The tourist eats at

A- Souvenir Store B- school C- restaurant

2- The tourist repairs his car at

A- Auto Garage B- school C- restaurant

المحور ٣ : كيف يعمل العالم من حولي ؟
الفصل الثالث : البيع والشراء والادخار
Theme 3 : How The World Works?
Chapter 3 : BUYING, SELLING AND SAVING

Lesson 1 Questions : DAILY DIET

Question 1 : Put (✓) or (✗):-

- 1- Healthy food is the food that we should eat daily. ()
- 2- Chocolate is a healthy food. ()
- 3- Fruit is an unhealthy food. ()
- 4- Beans are a healthy food. ()
- 5- Sweets are an unhealthy food. ()

Question 2: Choose the correct answer:-

1- is the food that we should eat daily..

- A- Healthy food B- Unhealthy food C- Soda drinks

2- is considered unhealthy food.

- A- Soda drinks B- Bananas C- Vegetables

3- is considered healthy food.

- A- Soda drinks B- Chocolate C- Yogurt

4- is considered healthy food.

- A- Rice B- Sweets C- Cake

Lesson 2 Questions : SHOPPING FOR NADIA

Question 1 : Put (✓) or (×):-

- 1- We buy bread from the pharmacy. ()
- 2- We buy honey from the grocery store. ()
- 3- We buy medicine from the pharmacy. ()
- 4- We buy books from the bookstore. ()
- 5- The pharmacist works in the pharmacy. ()

Question 2: Choose the correct answer:-

1- We buy bread from

- A- Pharmacy B- Bakery C- bookstore

2- We buy books from

- A- Pharmacy B- Bakery C- bookstore

3- We buy medicine from

A- Pharmacy

B- Bakery

C- bookstore

4- The baker works at

A- Pharmacy

B- Bakery

C- bookstore

5- The pharmacist works at

A- Pharmacy

B- Bakery

C- bookstore



الدرس ٣ : هيا نتسوق مع نادية Lesson3: LET'S GO SHOPPING WITH NADIA

Circle the good that costs the most.

Draw a triangle around the good that costs the least.

Choose two goods to buy.

Complete the sentences.

ضع دائرة حول المنتج الأعلى تكلفة.

ارسم مثلثا حول المنتج الأقل تكلفة.

اختر منتجين لتشتريهما.

أكمل الجمل



سأشتري ١ :

1- I will buy the :

سأشتري ٢ :

2- I will buy the :

السعر :

It costs :

السعر :

It costs :

سعر المنتج الأول First good cost	+	سعر المنتج الثاني Second good cost	=	الإجمالي Total
.....	+	=

I need pounds to buy these goods.

Theme 4 : COMMUNICATION

المحور ٤ : التواصل

CHAPTER 1 : COMMUNICATING WITH NUMBERS الفصل الأول : التواصل بلغة الأرقام

Lesson 1 Questions : MENU NUMBERS

Question 1 : Put (✓) or (✗):-

1- 3 kg is the weight of the fruit. ()

2- 10 LE expresses the weight of the goods. ()

3- 90° C is the temperature Degree. ()

Question 2: Choose the correct answer:-

1- is the price of the product.

A- 2 kg B- 3:00 C- 10 LE

2-is the price of the product.

A- 2 kg B- 3:00 C- 10 LE



Lesson 2: FAVORITE FRUIT

- Use the survey information to answer the questions.
- The class is going to have fruit for a snack.
- The teacher asks the class to choose a favorite fruit.

Number of العدد	Fruit الفاكهة
	Orange برتقال
	Figs تين
	Grapes عنب
	Melons بطيخ
	Mangoes مانجو

How many students like orange the best?
How many students like figs the best?
How many students like grapes the best?
How many students like melons the best?
How many students like mangoes the best?

Which fruit is the favorite of most students?
---	-------

The teacher will buy two kinds of fruit. What should the teacher buy?	
First Type is	Second Type is

Lesson 3 Questions : TECHNOLOGY WITH NUMBERS

Question 1 : Put (✓) or (×):-

- 1- The Egyptians used the abacus about 4000 years ago. ()
- 2- Pascal's Calculator was invented more than 300 years ago. ()
- 3- The electronic calculator is currently used. ()

Question 2: Choose the correct answer:-

1- It is a calculator that is currently used.

- A- Abacus B- Pascal's Calculator C- The calculator

2- The Egyptians used about 4000 years ago.

- A- Abacus B- Pascal's Calculator C- The adding machine

3- It is a mechanical calculator.

- A- Abacus B- Pascal's Calculator C- The mechanical adding machine

Theme 4 : COMMUNICATION

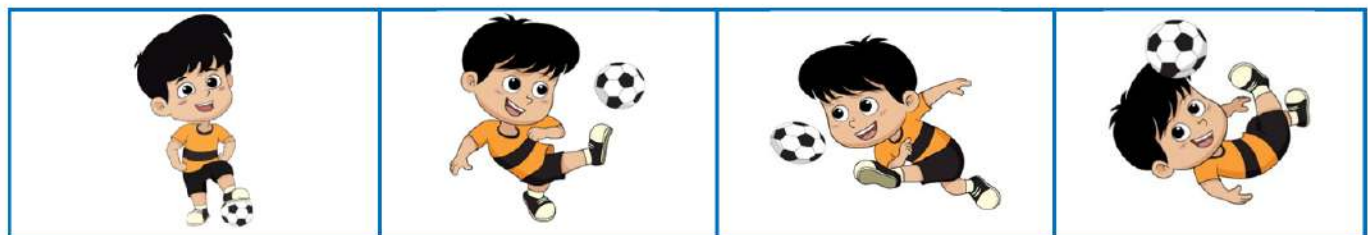
المحور ٤ : التواصل

CHAPTER 2 : COMMUNICATING WITH ART الفصل الثاني : التواصل من خلال الفن

Lesson1: IMITATING MOVES

Match the picture of the kid moving the ball with the appropriate word

اركلها للخلف Kick it backwards	اركلها للأمام kick it forward	اركلها لأسفل kick it down	اركلها لأعلى kick it high
-----------------------------------	----------------------------------	------------------------------	------------------------------



Lesson 2 Questions : ART SHOW WEBSITE

Question 1 : Put (✓) or (×):-

- 1- We search online for more information. ()
- 2- It allows you to touch the art in the art show. ()
- 3- The art show contains photographs. ()
- 4- The art show contains statues. ()
- 5- Tulips are beautiful flowers. ()
- 6- The painter is an artistic profession. ()
- 7- You should not touch statues in art show and museums. ()

Question 2: Choose the correct answer:-

- 1- We search through to get more information.
A- The Internet B- Radio C- Television
- 2- It is considered one of the artistic professions
A- Baker B- Sculptor C- Butcher

Lesson 3: BIRD SCULPTURES

Look at the following cat SCULPTURES and match each figurine to each type it is made of?

Cat SCULPTURES مجسم القطة

Made of مصنوع من



Wood الخشب



Fabric القماش



Metal المعدن



البلاستيك



Paper الورق

Lesson 4 : MASKS

الدرس ٤ : الأقنعة

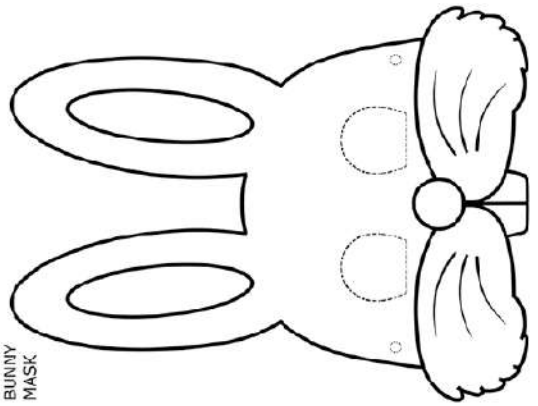


- صمم القناع المفضل لديك :

- Look at the masks. Then design your favorite one.


1

ارسم القناع على ورقة
Draw the mask on paper.



2

لون الرسم
Color your drawing



3

فرغ القناع
Empty the mask




4

احضر عدد ٢ اسيتيك وركبهم
Get 2 rubber bands and install them.



BUNNY
MASK
(Blue)



copyright 2010 www.firstpalette.com

Lesson 5 Questions : SHOPPING SCRIPT

Question 1 : Put (✓) or (×):-

- 1- The store worker helps the shopper. ()
- 2- The store worker hands us what we buy. ()
- 3- Sculptures can be made of metal. ()
- 4- A mask can be made in the shape of a cat. ()

Question 2: Choose the correct answer:-

- 1- helps us in shopping inside the store.
A- Store worker B- Doctor C- Artist
- 2- We go to to buy food.
A- The store B- The pharmacy C- The library
- 3- We hand over the money when buying from the store to
A- The store worker B- The driver C- The pilot