



التأسيس السليم

# المراجعة النهائية أولى ابتدائي



2026

اختبار  
الأول في  
مصر



HOTLINE

012 8888 0390


[www.altaasisalsaleem.com](http://www.altaasisalsaleem.com)

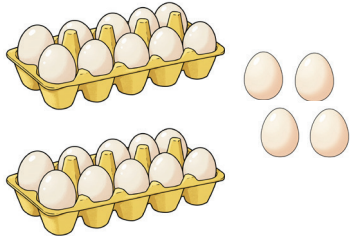
# Mathematics

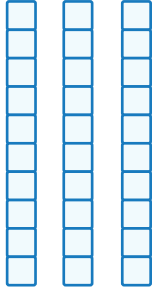
FIRST TERM

# Mathematics Exam 1

**Question 1** Count and write the number:

(a)   
.....

(b)   
.....

(c)   
.....

**Question 2** Complete with (bigger than - smaller than - equal to):

(a) 12 ..... 8      (b) 6 ..... 16

(c) 10 ..... 10      (d) 37 ..... 25

**Question 3** Find the result:

(a)	$\begin{array}{r} 3 \\ + \\ 4 \\ \hline \end{array}$	(b)	$\begin{array}{r} 12 \\ + \\ 6 \\ \hline \end{array}$	(c)	$\begin{array}{r} 9 \\ - \\ 0 \\ \hline \end{array}$	(d)	$\begin{array}{r} 10 \\ - \\ 8 \\ \hline \end{array}$	(e)	$\begin{array}{r} 15 \\ + \\ 1 \\ \hline \end{array}$
	.....		.....		.....		.....		.....

**Question 4** Read and answer:


A girl has 8 balloons. 3 fly away.

**How many balloons are left with her?**

Math sentence: ..... = ..... Answer:  balloons.



**Question 5** Look at the pictures then answer the questions:



- (a) Name the fruit in the 3rd position from the left? .....
- (b) What is the position of the apple from the right? .....
- (c) What is the position of the Pineapple from the Left? .....
- (d) Circle 2 fruits from the right.

**Question 6** Write the missing number in each box:

<p>(a)</p>	<p>(b)</p>	<p>(c)</p>	<p>(d)</p>
<p>(e)</p>	<p>(f)</p>	<p>(g)</p>	<p>(h)</p>

**Question 7** Tick (✓) next to the longer object in each group:

<input type="checkbox"/> <input type="checkbox"/>	<input type="checkbox"/> <input type="checkbox"/>

# Mathematics Exam 2

**Question 1** Write each number in digits:


- |     |          |       |     |            |       |
|-----|----------|-------|-----|------------|-------|
| (a) | Seven    | ..... | (b) | Zero       | ..... |
| (c) | Thirteen | ..... | (d) | Forty-nine | ..... |
| (e) | Twenty   | ..... | (f) | Thirty-six | ..... |

**Question 2** Write the missing numbers:

- (a) 0   2   .....   6   .....   10
- (b) 33   34   .....   .....   37   .....
- (c) 16   15   .....   13   .....   11



**Question 3** What's the time?

- (a)  It's .....
- (b)  It's .....
- (c)  It's .....

**Question 4** Complete:

- (a)  $12 + 8 = \dots$    (b)  $10 + 9 = \dots$    (c)  $4 + 3 + 2 = \dots$
- (d)  $3 + 5 = \dots$    (e)  $8 - 2 = \dots$    (f)  $12 - 2 - 5 = \dots$
- (g)  $14 - 4 = \dots$    (h)  $7 + 0 = \dots$    (i)  $16 - 4 + 1 = \dots$

**Question 5 Read and answer:**



A box has **8** pencils. Another box has **9** pencils.

**How many pencils are there in total?**

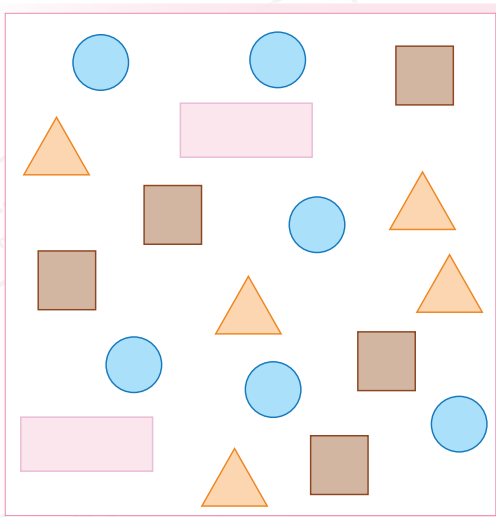
Math sentence: ..... = ..... Answer:  pencils.

**Question 6 Use the number line and answer:**



- (a) How far did the frog go? .....
- (b) What number is 3 less than 4? .....
- (c) How far did the rabbit go? .....
- (d) What number is 5 more than 15? .....

**Question 7 Color according to the number of each shape in the picture, then answer the questions:**



<b>Triangles</b>	<b>Rectangles</b>	<b>Squares</b>	<b>Circles</b>

- (a) Which shape has the most? .....
- (b) Which shape has the Least? .....
- (c) Which shapes have the same number? .....
- (d) How many circles are there? .....

**Mathematics Exam 3**

**Question 1 Write the numbers in words:**

(a) **20** .....

(b) **18** .....

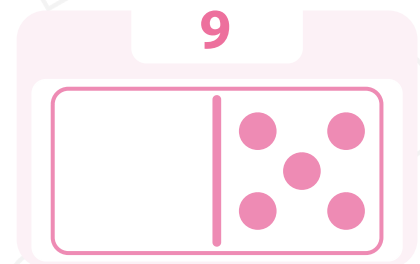
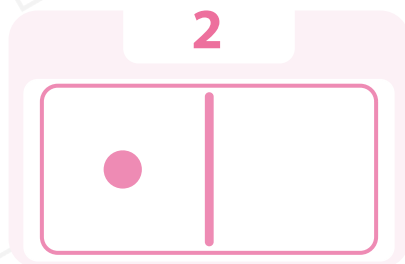
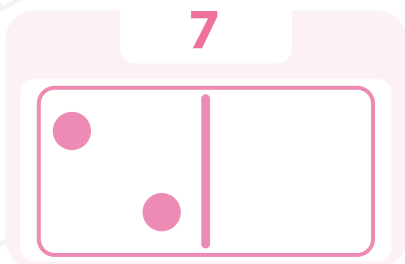
(c) **7** .....

(d) **41** .....

(e) **11** .....

(f) **32** .....

**Question 2 Complete by drawing dots on each domino to show the given number:**



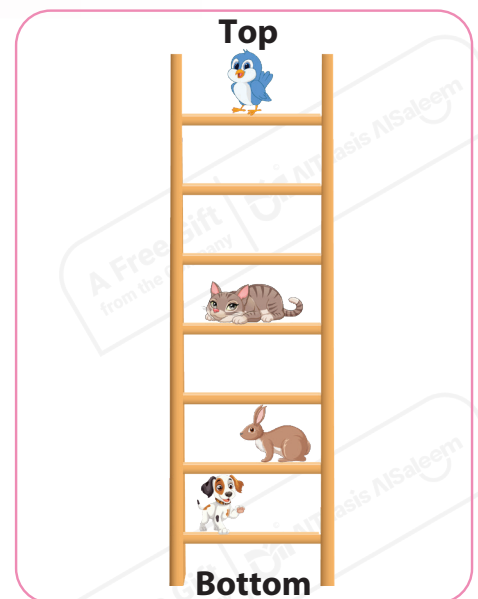
**Question 3 Look at the ladder, then answer:**

(a) The dog is on the ..... step from the bottom.

(b) The rabbit is on the ..... step from the top.

(c) The ..... is on the 4th step.

(d) The ..... is on the 1st step from the top.




**Question 4** Fill in the blanks:


(a)  $14 + 3 = \dots\dots\dots$


(b)  $17 - 5 = \dots\dots\dots$


(c)  $18 + 2 = \dots\dots\dots$

**Question 5** Match each picture with its suitable math sentence:

a 

b 

c 

d 

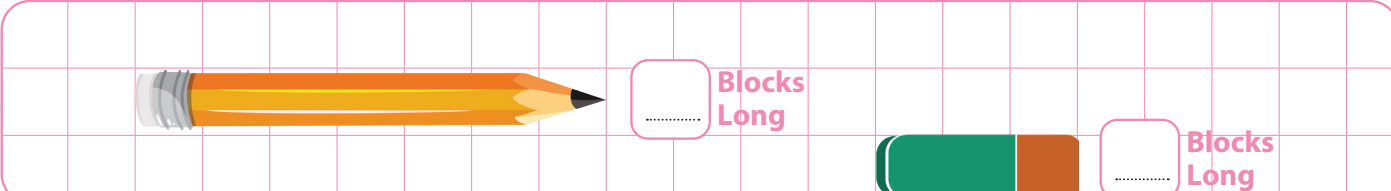
$5 + 3$

$2 - 0$

$3 - 1$

$4 + 0$

**Question 6** Compare the lengths of the pencil and the eraser:



Blocks Long

Blocks Long

Which is longer: the eraser or the pencil?

**Answer:** The .....







**Question 7** Read and answer:

Jaser saw 7 cars and 5 bicycles. What is the difference between the number of cars and bicycles that Jaser saw?

Math sentence = ..... = ..... Answer: .....

**Mathematics Exam 4**


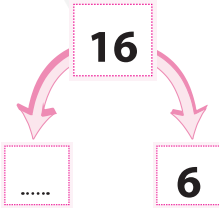

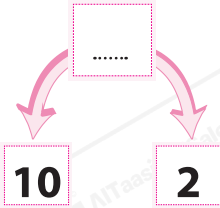
**Question 1 Complete the following:**

- (a)  is ..... than  (b) **25 , 24 , 23 ,** ..... , .....
- (c) The week has ..... days. (d) The time  is ..... o'clock.
- (e) The order of the blue balloon is the .....   

**Question 2 Add or subtract:**

- (a) **12 + 5 =** ..... (b) **24 + 0 =** ..... (c) **10 + 9 =** .....
- (d) **17 - 7 =** ..... (e) **31 - 0 =** ..... (f) **8 - 5 =** .....
- (g) **28 - 28 =** ..... (h) **16 - 8 =** ..... (i) **6 + 6 =** .....


**Question 3 Fill in the blanks:**

- (a) **16 is**  **and 6** 
- (b) **10 and 2** **make**  

**Question 4 Put the numbers in order:**

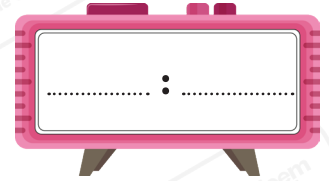
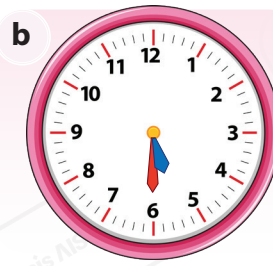
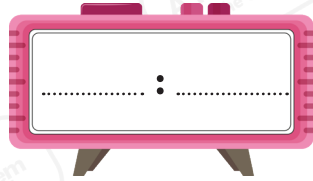
**5 , 10 , 8 , 6**

**Least**



**Greatest**

**Question 5 Write the time on each digital clock:**



**Question 6 Read and answer:**

There are 7 flowers in the garden. Yesterday, my sister picked 3 flowers, and my brother picked 2 more flowers today.

How many flowers are left? Write the math sentence and the answer.



There were ..... flowers.

..... flowers were picked.

..... more flowers were picked.

Math sentence: ..... = .....

Answer:  flowers.

**Question 7 The chart shows the favorite fruits of 24 students. Answer the following questions:**

(a) Which fruit has the most?

.....

(b) Which fruit has the Least?


.....

(c) How many bananas are there?

.....

(d) How many mangoes are there?

.....



# Mathematics Exam 5

**Question 1** Count then write the numbers in digits and words:

**a**

\_\_\_\_\_

\_\_\_\_\_

**b**

\_\_\_\_\_

\_\_\_\_\_

**Question 2** Circle the bigger number:

(a)

7

17

(b)

20

18

(c)

6

9

**Question 3** Join:

a)  $24 + 0 =$  \_\_\_\_\_

b)  $10 + 10 =$  \_\_\_\_\_

c)  $13 - 3 =$  \_\_\_\_\_

d)  $19 - 19 =$  \_\_\_\_\_

$5 + 5 =$  \_\_\_\_\_

$10 - 10 =$  \_\_\_\_\_

$24 - 0 =$  \_\_\_\_\_

$20 + 0 =$  \_\_\_\_\_

**Question 4** Read and answer:

There are **6** birds on the tree. **3** more birds fly to the tree. How many birds are on the tree now? Write the math sentence and the answer.


Math sentence: \_\_\_\_\_ = \_\_\_\_\_

**Answer** \_\_\_\_\_



**Model Answer**

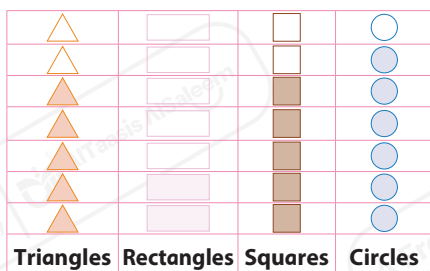
**Exam (1)**

- Q1 (a) 8 (b) 24 (c) 30  
 Q2 (a) bigger than (b) smaller than  
 (c) equal to (d) bigger than  
 Q3 (a) 7 (b) 18 (c) 9 (d) 2 (e) 16  
 Q4  $8 - 3 = 5$  Answer: 5  
 Q5 (a) orange (b) 4th  
 (c) 1st (d)  Left right  
 Q6 (a) 1 (b) 2 (c) 4 (d) 1  
 (e) 2 (f) 1 (g) 3 (h) 7




**Exam (2)**

- Q1 (a) 7 (b) 0 (c) 13 (d) 49 (e) 20 (f) 36  
 Q2 (a) 4, 8 (b) 35, 36, 38 (c) 14, 12  
 Q3 (a) 4 o'clock (b) half past 7 (c) 12 o'clock  
 Q4 (a) 20 (b) 19 (c) 9 (d) 8 (e) 6  
 (f) 5 (g) 10 (h) 7 (i) 13  
 Q5  $8 + 9 = 17$  Answer 17  
 Q6 (a) 6 (b) 1 (c) 11 (d) 20  
 Q7 (a) circle (b) rectangle  
 (c) triangles and squares (d) 6




**Exam (3)**

- Q1 (a) Twenty (b) Eighteen (c) Seven  
 (d) Forty-one (e) Eleven (f) Thirty-two  
 Q2 

- Q3 (a) 1st (b) 6th (c) cat (d) bird

Q4 (a)  $14 + 3 = 17$  (b)  $17 - 5 = 12$   
  


(c)  $18 + 2 = 20$   


- Q5 (a)  $3 - 1$  (b)  $4 + 0$  (c)  $5 + 3$  (d)  $2 - 0$

- Q6  7  3 "The Pencil"

- Q7  $7 - 5 = 2$  Answer: 2

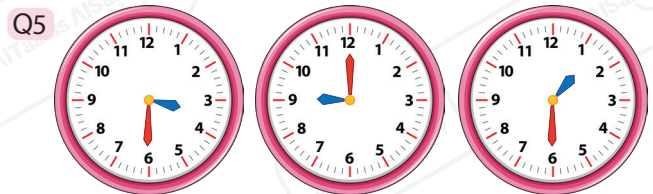
**Exam (4)**

- Q1 (a) Shorter (b) 22, 21 (c) 7 (d) 3 (e) 2nd  
 Q2 (a) 17 (b) 24 (c) 19 (d) 10 (e) 31  
 (f) 3 (g) 0 (h) 8 (i) 12  
 Q3 (a) 10, 10 (b) 12, 12  
 Q4 5, 6, 8, 10  
 Q5 10 : 00 5 : 30  
 Q6 7, 3, 2  $7 - 3 - 2 = 2$  Answer = 2  
 Q7 (a) Apples (b) Oranges (c) 6 (d) 7

**Exam (5)**

- Q1 (a) 21 twenty-one (b) 35 thirty-five  
 Q2 (a) 17 (b) 20 (c) 9  
 Q3 (a)  $24 \rightarrow (24 - 0)$  (b)  $20 \rightarrow (20 + 0)$   
 (c)  $10 \rightarrow (5 + 5)$  (d)  $0 \rightarrow (10 - 10)$

- Q4  $6 + 3 = 9$



- Q6 Tooth paste

- Q7 (a) Group (2)  
 (b) sea horse

تطبيق



مذكرات جاهزة للطباعة

لتحميل الملفات التعليمية مجاناً للمعلم والطالب

مذكرات وملازم / مراجعات وملخصات / امتحانات / كتب الوزارة /  
أدلة المعلم / دفاتر التحضير / سجلات مدرسية / أوراق تأسيس

امسح الكود بموبايلك علشان تقدر تثبت التطبيق  
وتقدر ف أي وقت تحمّل ال نفسك فيه ببلاش  
هيغنيك عن البحث والجروبات والقنوات الكثيرة

