


Math

• Prim 3 1st term

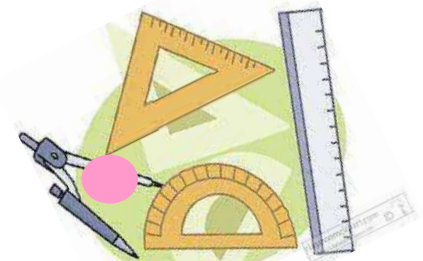


October Revision



Teacher

Eman Samir



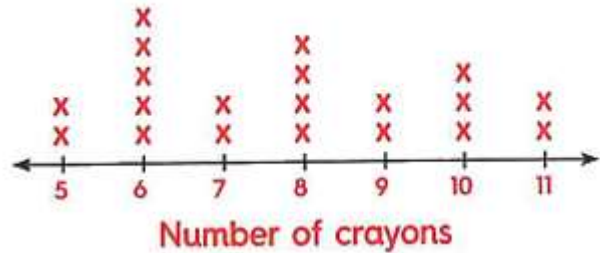
chapter 1**Q1 Choose the correct answer:-**

- 1) 9, 19, 29, 39, (in same pattern)
- a) 40 b) 45 c) 49 d) 50
- 2) The rule of the pattern : 16, 20, 24, is
- a) +4 b) -4 c) +2 d) -2
- 3) 3 meters = centimeters.
- a) 30 b) 300 c) 3 d) 3,000
- 4) 3,200 cm = m
- a) 32 b) 320 c) 3200
- 5) 5 m + 5 cm = cm
- a) 55 b) 505 c) 550 d) 5
- 6) 30 mm = cm
- a) 3 b) 10 c) 30 d) 300
- 7) The tally marks ||||| represents the number
- a) 9 b) 8 c) 7 d) 6
- 6) the suitable unit to measure a paper clip is
- a) m b) cm c) gm d) km

Q2 Answer the following :-

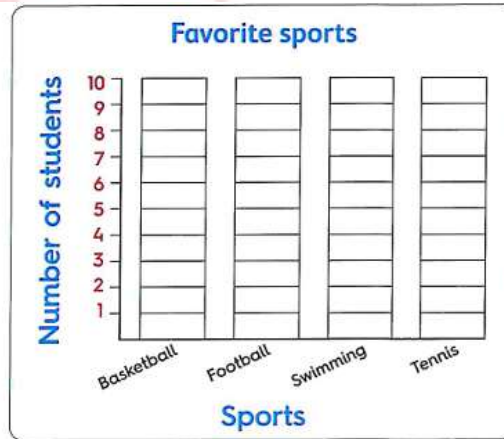
1) Use the line plot to answer the following :-

- a. how many children have 8 crayons ?
- b. how many children have more than 9 crayons ?
- c. how many children have less than 7 crayons ?



2) Complete the tally table then use it to make a bar graph :-

Favorite sports		
Sports	Number of students	Number
Basketball		_____
Football	/	_____
Swimming	/	_____
Tennis		_____



Answer the following :-

- a. How many students liked a basket ball ?
- b. Which sport got the most votes ?
- c. Which sport got the least votes ?

chapter 2

Q1 Choose the correct answer:-

- 1) $9,000 + 800 + 30 + 5 = \dots\dots\dots$
 a) 9,853 b) 9,385 c) 9,835
- 2) 5 ones + 3 tens + 8 thousands = $\dots\dots\dots$
 a) 5,038 b) 835 c) 8,035
- 3) Sixty-two thousand, three hundred nineteen in standard form is $\dots\dots\dots$
 a) 62,319 b) 319 c) 62,000 d) 62,900
- 4) $648 + 9,000 = \dots\dots\dots$
 a) 90,648 b) 9,648 c) 6,489 d) 64,809
- 5) The value of the digit 7 in the number 1,437 is $\dots\dots\dots$
 a) 70 b) 7,000 c) 700 d) 7
- 6) The value of the digit 0 in the number 45,208 is $\dots\dots\dots$
 a) 1,000 b) hundreds c) 10 d) 0
- 7) The place value of the digit 1 in the number 2,314 is $\dots\dots\dots$
 a) ones b) tens c) 10 d) hundred
- 8) The place value of the 8 in the number 385,126 is $\dots\dots\dots$
 a) hundreds b) thousands c) ten thousands
- 9) 3 thousands = $\dots\dots\dots$
 a) 300 b) 30 c) 3,000 d) 3
- 10) 46 hundreds = $\dots\dots\dots$
 a) 46 b) 4,600 c) 460

11) = 30 tens.

- a) 30 b) 300 c) 30,000 d) 3,010

12) 800 tens = thousands.

- a) 8 b) 80 c) 800 d) 8,000

13) The greatest 5-different digit number is

- a) 99,999 b) 98,765 c) 56,789 d) 10,234

14) The number just before the number 4,256 is

- a) 4,254 b) 4,255 c) 4,257 d) 4,258

15) The smallest number formed from the digit 3 , 8 , 0 , 7 and 9 is

- a) 70,839 b) 30,897 c) 30,789 d) 30,987



Q2 Complete the following :-

1) From the digits: 5 , 2 , 1 , 4 , 0 , 3 :

a. The greatest number is


b. The smallest number is

2) In the opposite array:

a. Number of rows =

b. Number of columns =

c. Total number of items =



3) Write in word form 4,302

Q3 Answer the following :-

1) Compare using ">, = or <"

a. 300 thousands 3,000 hundredsb. One hundred thousand 99,999c. 25,600 tens 256 thousands

2) Write the numbers in order from least to greatest

65,621

45,714

3,765

888,56

The order is :,,,

3) Write the numbers in order from greatest to least

170,072

52,791

203,415

304,109

The order is :,,,



chapter 3**Q1 Choose the correct answer:-**

1) $6 \times 3 = \dots\dots$

- a) 3 b) 2 c) 18 d) 10

2) $5 \times \dots\dots = 40$

- a) 6 b) 8 c) 40 d) 10

3) $\dots\dots$ is a multiple of 4

- a) 3 b) 16 c) 9 d) 25

4) The number $\dots\dots$ is a common multiple of 2 and 3

- a) 12 b) 9 c) 4 d) 10

5) A bag contains 3 oranges, the number of oranges in 5 bags is equal to $\dots\dots$

- a) 15 b) 12 c) 9 d) 6

6) $\dots\dots$ is a factor of the number 15

- a) 3 b) 6 c) 7 d) 8

7) The two numbers 3 and 5 are factors of the number $\dots\dots$

- a) 8 b) 15 c) 18 d) 9

8) The numbers 1 , 2 , 5 , 10 are all factors of the number $\dots\dots$

- a) 2 b) 5 c) 10 d) 18

9) The factors of 6 are $\dots\dots$

- a) 2,3 b) 1,2,3,30 c) 2,3,6 d) 1,2,3,6

10) Quarter of an hour = minutes.

- a) 30 b) 600 c) 15

11) Half of an hour = minutes.

- a) 15 b) 30 c) 45 d) 60

12) The time that appears on the opposite clock is

- a) 3 : 30 b) 3 : 20 c) 4 : 15 d) 4 : 30



13) $24 \div 4 =$

- a) 9 b) 6 c) 3 d) 7

14) $42 \div 7 =$

- a) 7 b) 49 c) 6 d) 35

15) $36 \div 9 =$

- a) 9 b) 4 c) 3 d) 5

16) $3 \times 6 = 2 \times$

- a) 3 b) 6 c) 2 d) 9

17) $36 \div 6 = 2 \times$

- a) 5 b) 4 c) 3 d) 2

18) 6×3 2×9

- a) < b) > c) = d) otherwise

19) If a teacher has 50 crayons wants to divided them among 5 students, then the number of crayons for each student is

- a) 8 b) 9 c) 10 d) 45

Q2 complete the following:-

1) Write five multiples of the number 2 that are less than 13

..... , , , ,

2) Multiples of the number 3 included between 5 and 10 are

Q3 Answer the following:

1) A box contain 5 pencils. How many pencils in 8 boxes?

Pencils in 8 boxes =

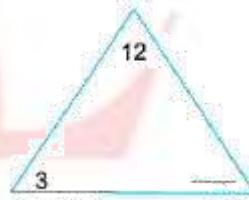
2) Find the missing factor in the triangle, then complete:

$$3 \times \dots = 12$$

$$\dots \times 3 = 12$$

$$12 \div 3 = \dots$$

$$12 \div \dots = 3$$



3) Complete the fact family for the set of numbers 8,9 and 72

$$\dots \times \dots = \dots$$

$$\dots \div \dots = \dots$$

$$\dots \times \dots = \dots$$

$$\dots \div \dots = \dots$$



4) Write the time shown on the clock.

The time is :



6) Ahmed went to the cinema at 6 : 00 pm, he returned home at 8 : 00 pm

What time did he take?

7) Hossam started studying at 8 : 00 and he finished at 9 : 15

How many minutes did Hossam spend of studying?

Answers

chapter 1

Q1 Choose the correct answer:-

1) 9, 19, 29, 39, (in same pattern)

- a) 40 b) 45 c) 49 d) 50

2) The rule of the pattern : 16, 20, 24, is

- a) +4 b) -4 c) +2 d) -2

3) 3 meters = centimeters.

- a) 30 b) 300 c) 3 d) 3,000

4) 3,200 cm = m

- a) 32 b) 320 c) 3200

5) 5 m + 5 cm = cm

- a) 55 b) 505 c) 550 d) 5

6) 30 mm = cm

- a) 3 b) 10 c) 30 d) 300

7) The tally marks ||||| represents the number

- a) 9 b) 8 c) 7 d) 6

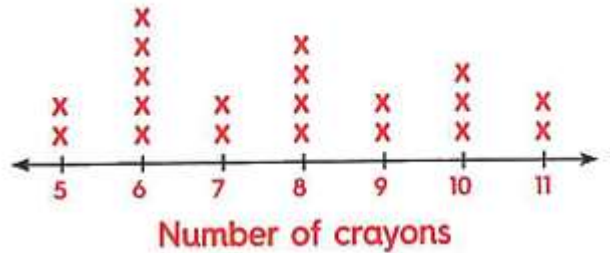
6) the suitable unit to measure a paper clip is

- a) m b) cm c) gm d) km

Q2 Answer the following :-

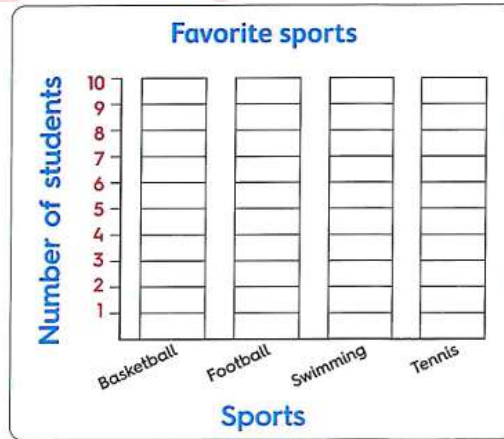
1) Use the line plot to answer the following :-

- d. how many children have 8 crayons ? 4
- e. how many children have more than 9 crayons ? 5
- f. how many children have less than 7 crayons ? 7



2) Complete the tally table then use it to make a bar graph :-

Favorite sports		
Sports	Number of students	Number
Basketball		4
Football	/	8
Swimming	/	6
Tennis		3



Answer the following :-

- d. How many students liked a basket ball ? 4
- e. Which sport got the most votes ? football
- f. Which sport got the least votes ? tennis

chapter 2

Q1 Choose the correct answer:-

- 1) $9,000 + 800 + 30 + 5 = \dots\dots\dots$
 a) 9,853 b) 9,385 **c) 9,835**
- 2) 5 ones + 3 tens + 8 thousands = $\dots\dots\dots$
 a) 5,038 b) 835 **c) 8,035**
- 3) Sixty-two thousand, three hundred nineteen in standard form is $\dots\dots\dots$
 a) **62,319** b) 319 c) 62,000 d) 62,900
- 4) $648 + 9,000 = \dots\dots\dots$
 a) 90,648 b) **9,648** c) 6,489 d) 64,809
- 5) The value of the digit 7 in the number 1,437 is $\dots\dots\dots$
 a) 70 b) 7,000 c) 700 **d) 7**
- 6) The value of the digit 0 in the number 45,208 is $\dots\dots\dots$
 a) 1,000 b) hundreds c) 10 **d) 0**
- 7) The place value of the digit 1 in the number 2,314 is $\dots\dots\dots$
 a) ones b) **tens** c) 10 d) hundred
- 8) The place value of the 8 in the number 385,126 is $\dots\dots\dots$
 a) hundreds b) thousands c) **ten thousands**
- 9) 3 thousands = $\dots\dots\dots$
 a) 300 b) 30 **c) 3,000** d) 3
- 10) 46 hundreds = $\dots\dots\dots$
 a) 46 b) **4,600** c) 460

11) = 30 tens.

- a) 30 **b) 300** c) 30,000 d) 3,010

12) 800 tens = thousands.

- a) 8 b) 80 c) 800 **d) 8,000**

13) The greatest 5-different digit number is

- a) 99,999 **b) 98,765** c) 56,789 d) 10,234

14) The number just before the number 4,256 is

- a) 4,254 **b) 4,255** c) 4,257 d) 4,258

15) The smallest number formed from the digit 3 , 8 , 0 , 7 and 9 is

- a) 70,839 **b) 30,897** c) 30,789 d) 30,987

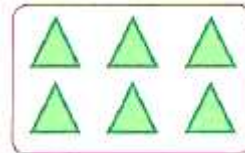
Q2 Complete the following :-

1) From the digits: 5 , 2 , 1 , 4 , 0 , 3 :

- a. The greatest number is 102,345
b. The smallest number is 453,210

2) In the opposite array:

- a. Number of rows = 2
b. Number of columns = 3
c. Total number of items = $2 \times 3 = 6$



3) Write in word form 4,302 four thousand three hundred and two

Q3 Answer the following :-

1) Compare using " >, = or < "

d. 300 thousands = 3,000 hundreds

e. One hundred thousand > 99,999

f. 25,600 tens = 256 thousands

2) Write the numbers in order from least to greatest

65,621

45,714

3,765

888,56

The order is : 3,765 , 45,714 , 65,621 , 888,563

3) Write the numbers in order from greatest to least

170,072

52,791

203,415

304,109

The order is : 304,109 , 203,415 , 170,072 , 52,791



chapter 3

Q1 Choose the correct answer:-

1) $6 \times 3 = \dots\dots\dots$

- a) 3 b) 2 c) 18 d) 10

2) $5 \times \dots\dots\dots = 40$

- a) 6 b) 8 c) 40 d) 10

3) $\dots\dots\dots$ is a multiple of 4

- a) 3 b) 16 c) 9 d) 25

4) The number $\dots\dots\dots$ is a common multiple of 2 and 3

- a) 12 b) 9 c) 4 d) 10

5) A bag contains 3 oranges, the number of oranges in 5 bags is equal to $\dots\dots\dots$

- a) 15 b) 12 c) 9 d) 6

6) $\dots\dots\dots$ is a factor of the number 15

- a) 3 b) 6 c) 7 d) 8

7) The two numbers 3 and 5 are factors of the number $\dots\dots\dots$

- a) 8 b) 15 c) 18 d) 9

8) The numbers 1 , 2 , 5 , 10 are all factors of the number $\dots\dots\dots$

- a) 2 b) 5 c) 10 d) 18

9) The factors of 6 are $\dots\dots\dots$

- a) 2,3 b) 1,2,3,30 c) 2,3,6 d) 1,2,3,6

10) Quarter of an hour = minutes.

- a) 30 b) 600 c) 15

11) Half of an hour = minutes.

- a) 15 b) 30 c) 45 d) 60

12) The time that appears on the opposite clock is

- a) 3 : 30 b) 3 : 20 c) 4 : 15 d) 4 : 30



13) $24 \div 4 =$

- a) 9 b) 6 c) 3 d) 7

14) $42 \div 7 =$

- a) 7 b) 49 c) 6 d) 35

15) $36 \div 9 =$

- a) 9 b) 4 c) 3 d) 5

16) $3 \times 6 = 2 \times$

- a) 3 b) 6 c) 2 d) 9

17) $36 \div 6 = 2 \times$

- a) 5 b) 4 c) 3 d) 2

18) 6×3 2×9

- a) < b) > c) = d) otherwise

19) If a teacher has 50 crayons wants to divided them among 5 students, then the number of crayons for each student is

- a) 8 b) 9 c) 10 d) 45

Q2 complete the following:-

- 1) Write five multiples of the number 2 that are less than 13
0 , 2 , 4 , 6 , 8
- 2) Multiples of the number 3 included between 5 and 10 are 6 , 9

Q3 Answer the following:

- 1) A box contain 5 pencils. How many pencils in 8 boxes?

$$\text{Pencils in 8 boxes} = 5 \times 8 = 40$$

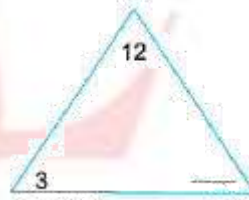
- 2) Find the missing factor in the triangle, then complete:

$$3 \times 4 = 12$$

$$4 \times 3 = 12$$

$$12 \div 3 = 4$$

$$12 \div 4 = 3$$



- 3) Complete the fact family for the set of numbers 8,9 and 72

$$9 \times 8 = 72$$

$$72 \div 8 = 9$$

$$8 \times 9 = 72$$

$$72 \div 9 = 8$$

4) Write the time shown on the clock.

The time is 9 : 20



6) Ahmed went to the cinema at 6 : 00 pm, he returned home at 8 : 00 pm

What time did he take? 2 hours

7) Hossam started studying at 8 : 00 and he finished at 9 : 15

How many minutes did Hossam spend of studying?

75 min.

تطبيق



مذكرات جاهزة للطباعة

لتحميل الملفات التعليمية مجاناً للمعلم والطالب

مذكرات وملازم / مراجعات وملخصات / امتحانات / كتب الوزارة /
أدلة المعلم / دفاتر التحضير / سجلات مدرسية / أوراق تأسيس

امسح الكود بموبايلك علشان تقدر تثبت التطبيق

وتقدر ف أي وقت تحمّل ال نفسك فيه ببلاش

هيغنك عن البحث والجروبات والقنوات الكثيرة

