

2025

Final revision

نماذج امتحانات



المنقذ



You Must Add Value

MATH

اعداد

أ / محمود الخولي

GRADE

1

2025

SECOND TERM



ELMONQEZ.COM

مجان
عنه

Model (1)

Question 1 : Choose the correct answer :


- 1) $20 \text{ L.E} + 20 \text{ L.E} + 1 \text{ L.E} + 1 \text{ L.E} = \dots\dots\dots \text{ L.E}$
 - a) 60
 - b) 24
 - c) 42
 - d) 50
- 2) The value of the digit 5 in 75 is

 - a) 5
 - b) 50
 - c) 15
 - d) 20

- 3) $8 \text{ Ones} + 2 \text{ Tens} = \dots\dots\dots$
 - a) 82
 - b) 28
 - c) 88
 - d) 90
- 4) $35 < \dots\dots\dots$
 - a) 28
 - b) 34
 - c) 30
 - d) 40
- 5) The smallest 2 – digit number is

 - a) 10
 - b) 11
 - c) 12
 - d) 14

Question 2 : Complete the following :

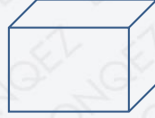
- 1) 98 , 87 , 76 , 65 ,,,
- 2) The number that comes just after 80 is
- 3) Tens + Ones = 72
- 4) The smallest number that can be formed from 6 and 7 is
- 5) The fraction of the shaded part is 

Question 3 : Answer the following :

- 1) Find the result :
 - a) $25 + 32 = \dots\dots\dots$
 - b) $86 - 12 = \dots\dots\dots$
 - c) $95 - 25 = \dots\dots\dots$
 - d) $56 - 26 = \dots\dots\dots$
- 2) Complete using ($<$, $=$ or $>$) :
 - a) 66 45
 - b) 80 8 Tens
 - c) 5 Ones + 4 Tens 54
 - d) Seventy nine 97

3 Write the name of each shape :

a)



Model (2)

Question 1 : Choose the correct answer :

- 1 $89 - 27 = \dots\dots\dots$
- (a) 50 (b) 62 (c) 63 (d) 72
- 2 $65 - 55 = \dots\dots\dots$
- (a) 10 (b) 9 (c) 12 (d) 11
- 3 $23 + 26 = \dots\dots\dots$
- (a) 50 (b) 52 (c) 49 (d) 39
- 4 $34 + 65 = \dots\dots\dots$
- (a) 89 (b) 79 (c) 99 (d) 100

Question 2 : Complete the following :

- 1 The number that comes just after 29 is
- 2 The place value of the digit 9 in 93 is
- 3 Ones + Tens = 93
- 4 The fraction of the shaded part in the opposite shape is
- 5 $52 - \dots\dots = 30$



Question 3 : Answer the following :

- 1 Complete using ($<$, $=$ or $>$) :
- a) $75 - 32 \dots\dots\dots 24 + 10$
- b) 6 Tens + 4 Ones
- c) $5 + 60 \dots\dots\dots 50 + 6$
- d) 20 L.E + 5 L.E + 1 L.E

- 2 Write the greatest and the smallest numbers that can be formed from the digits 3 and 5 , then find their sum :
- a) The greatest number is
- b) The smallest number is
- c) Their sum = + =
- 3 Nada has 68 L.E, and her sister Mona has 35 L.E. Find the difference between their money.
The difference = - = LE


Model (3)

Question 1 : Choose the correct answer :

- 1 7 Tens + 2 Ones =
- (a) 27 (b) 72 (c) 70 (d) 28
- 2 $31 = 10 + \dots\dots$
- (a) 21 (b) 41 (c) 30 (d) 20
- 3 10 more than 35 is
- (a) 36 (b) 45 (c) 25 (d) 90
- 4 The number to the left of 80 is
- (a) 81 (b) 70 (c) 79 (d) 40
- 5 The value of the digit 8 in 78 is
- (a) 8 (b) 80 (c) 18 (d) 14

Question 2 : Complete the following :

- 1 The number between 68 and 70 is
- 2 $76 \text{ L.E} = 20 \text{ L.E} + \dots\dots + \dots\dots + \dots\dots + \dots\dots + \dots\dots$
- 3 The smallest 2 – different digit number is
- 4 $5 \text{ Tens} + \dots\dots \text{ Tens} = 70$
- 5 The opposite shape is called a



Question 3 : Answer the following :

1 Arrange the following numbers in a descending order :

90	19	9	99	91
----	----	---	----	----

..... , , , ,

2 Sara had 78 L.E. She bought a shirt for 36 L.E. Find the remaining money with Sara.
Remaining = - = L.E.

3 From the opposite picture :

- 1) There are hens inside the cage.
- 2) There are hens outside the cage



Model (4)

Question 1 : Choose the correct answer :

1 64 is one less than

- (a) 63 (b) 64 (c) 65 (d) 66

2 + 6 = 10

- (a) 6 (b) 5 (c) 4 (d) 7

3 The square has sides.

- (a) 3 (b) 4 (c) 5 (d) 7

4 69 L.E 74 L.E

- (a) < (b) > (c) = (d) ≥

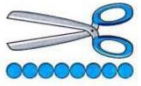


5 47 - 20 =

- (a) 27 (b) 37 (c) 57 (d) 14

6 The fraction of the shaded part  is

- (a) Half (b) Three fourths (c) Quarter (d) Third

Question 2 : Complete the following :

- ① $13 + 54 = \dots\dots$
- ② The length of  is $\dots\dots$ ●
- ③  The order of the boat is
- ④ The value of the digit 7 in 76 is $\dots\dots$
- ⑤ $70 - 50 = \dots\dots$
- ⑥ The name of the solid  is

Question 3 : Answer the following :

- ① In a bus there are 8 boys and 11 girls. How many children are in the bus?
- ② Vera has 17 pounds; she gave her brother 6 pounds. How much money with Vera now?
- ③ Count down:
70 , 69 , 68 , , ,

Model (5)


Question 1 : Choose the correct answer :

- ① $64 < \dots\dots\dots$




Ⓐ 71	Ⓑ 59	Ⓒ 60	Ⓓ 50
------	------	------	------
- ② $3 \text{ Tens} + 5 \text{ Ones} = \dots\dots\dots$

Ⓐ 50	Ⓑ 53	Ⓒ 35	Ⓓ 20
------	------	------	------
- ③ The rectangle has $\dots\dots$ corners.

Ⓐ 5	Ⓑ 4	Ⓒ 3	Ⓓ 6
-----	-----	-----	-----

- 4 is 10 more than 18.
 (a) 8 (b) 28 (c) 80 (d) 70
- 5 $30 + 50 = \dots\dots$
 (a) 80 (b) 70 (c) 90 (d) 60
- 6 The solid  is a
 (a) cube (b) circle (c) Sphere (d) Cone

Question 2 : Complete the following :

- 1 7 is less than
- 2 $23 + 51 = \dots\dots$
- 3 The time  is o'clock.
- 4 $13 - \dots\dots = 3$
- 5 The length of  is .

Question 3 : Answer the following :

- 1 Arrange from the tallest to the shortest



- 2 Count down.
 49 , 48 , , 46 , , ,

3

Match :

Second

43

Cuboid

6 + 7

4 + 9



2nd

40 + 3



Model (6)

Question 1 : Choose the correct answer :

- 1 The triangle has corners.
 (a) Zero (b) 2 (c) 3 (d) 4
- 2 38 29
 (a) < (b) > (c) = (d) ≥
- 3 40 – 10 =
 (a) 30 (b) 35 (c) 25 (d) 52
- 4 20 L.E + 20 L.E + 1 L.E = L.E
 (a) 40 (b) 50 (c) 41 (d) 31
- 5 The name of the solid  is a
 (a) pyramid (b) sphere (c) cone (d) cuboid
- 6 The time  is o'clock
 (a) 12 (b) 11 (c) 10 (d) 9

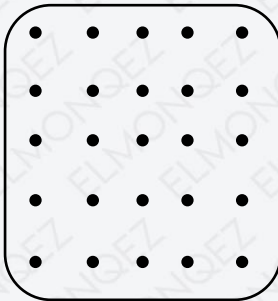
Question 2 : Complete the following :

- ① $58 - 45 = \dots\dots$
- ② The place value of 8 in 89 is
- ③ $2 \text{ tens} + 3 \text{ ones} = \dots\dots$
- ④ There are Fourths in one whole.
- ⑤ $4 + \dots\dots = 7$
- ⑥ is 10 less than 15

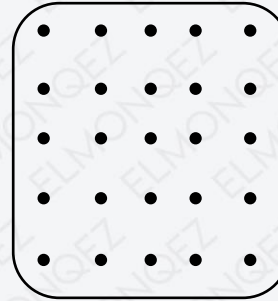
Question 3 : Answer the following :

① Draw :

a) Triangle



b) Square



- ② Hana has 45 colored marbles, she gave her sister 21 marbles. How many marbles does she have now?
- ③ Arrange from the greatest to the least.
38 , 52 , 17 , 45 , 20
..... , , , ,

Model (7)

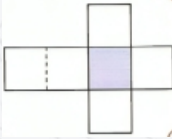
Question 1 : Choose the correct answer :

- ① 74 L.E 39 L.E

(a) >	(b) <	(c) =	(d) ≥
-------	-------	-------	-------
- ② The cat is the table. 

(a) inside	(b) outside	(c) below	(d) behind
------------	-------------	-----------	------------


- 3 $7 + 8 = \dots\dots$
- (a) 14 (b) 15 (c) 16 (d) 17

- 4 The net  shows a
- (a) *cube* (b) *cuboid* (c) *cone* (d) *cylinder*

- 5 $5 \text{ tens} + 6 \text{ ones} = \dots\dots$
- (a) 56 (b) 65 (c) 11 (d) 60

- 6 $10 \text{ L.E} + 10 \text{ L.E} + 5 \text{ L.E} + 1 \text{ L.E} = \dots\dots \text{ L.E}$
- (a) 35 (b) 20 (c) 25 (d) 26


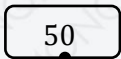
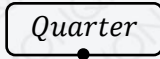
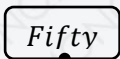

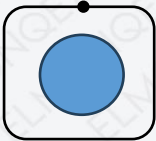

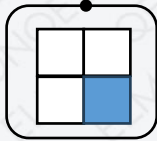
Question 2 : Complete the following :

- 1 The value of 4 in 34 is
- 2 $17 - \dots\dots = 11$
- 3  = tens + Ones
- 4 The circle has corners
- 5 is 1 more than 17
- 6 $38 - 25 = \dots$

Question 3 : Answer the following :

- 1 Count down
 $85, 75, \dots\dots, 55, \dots\dots, \dots\dots$

- 2 Join.

3 Arrange from the greatest to the least.

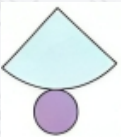
40 , 57 , 29 , 61 , 8
..... , , , ,

4 Complete using ($<$, $=$ or $>$) :

- a) 91 1 ten + 9 ones
b) The number of edges of a cube the number of edges of a cuboid.
c) 5 L.E + 50 L.E 20 L.E + 1L.E + 1 L.E
d) $31 + 14$ $90 - 40$

Model (8)

Question 1 : Choose the correct answer :

- 1 $29 \text{ L.E} - 20 \text{ L.E} = \dots\dots \text{ L.E}$
 (a) 9 (b) 40 (c) 49 (d) 50
- 2 $43 < \dots\dots$
 (a) 45 (b) 42 (c) 39 (d) 29
- 3 The circle has corners .
 (a) 0 (b) 1 (c) 3 (d) 4
- 4 $6 + \dots\dots = 18$
 (a) 11 (b) 12 (c) 13 (d) 14
- 5 The net  shows a
 (a) cube (b) cone (c) cuboid (d) cylinder
- 6 53 is 10 less than
 (a) 63 (b) 43 (c) 73 (d) 83

Question 2 : Complete the following :

- 1 The amount    
 is L.E

- 2 $17 - 13 = \dots\dots$
- 3 There are $\dots\dots$ sides in triangle.
- 4 The value of 9 in the number 39 is $\dots\dots$

Question 3 : Answer the following :

- 1 Arrange from the greatest to the least.
48 , 29 , 16 , 51 , 37
 $\dots\dots$, $\dots\dots$, $\dots\dots$, $\dots\dots$, $\dots\dots$

- 2 Complete.



- 3 Write the missing numbers in each sequence.
a) 10, 11 , 12 , $\dots\dots$, $\dots\dots$, $\dots\dots$
b) 15 , 25 , $\dots\dots$, $\dots\dots$, $\dots\dots$, 65

Model (9)

Question 1 : Choose the correct answer :


- 1 35 is greater than $\dots\dots$
- (a) 39 (b) 29 (c) 45 (d) 50
- 2 $3 + \dots\dots = 10$
- (a) 5 (b) 6 (c) 7 (d) 8
- 3 The day has $\dots\dots$ hours.
- (a) 20 (b) 22 (c) 24 (d) 26
- 4 The cube has $\dots\dots$ flat faces.
- (a) 12 (b) 8 (c) 6 (d) 4
- 5 $88 \text{ L.E} - 71 \text{ L.E} = \dots\dots \text{ L.E}$
- (a) 17 (b) 18 (c) 19 (d) 20


- 6 $26 < \dots\dots\dots$
- (a) 62 (b) 25 (c) 20 (d) 19

Question 2 : Complete the following :

1 The length of  is 

2  =

3 The fraction of the shaded part  is

4 The dog is the house. 

5 $9 - \dots = 4$

6 The time  is o'clock

Question 3 : Answer the following :

- 1 Complete the sequence.
41 , 42 , 43 , ,
- 2 In a bus there are 15 boys and 20 girls. How many children in the bus?
- 3 Reem has 45 pounds, she gave her brother 10 pounds. How much money with Reem now?
- 4 Count down
70 , 69 , 68 , , ,

Model (10)

Question 1 : Choose the correct answer :

- 1 When the time is 5 o'clock , the hour hand points to
 (a) 5 (b) 10 (c) 12 (d) 8
- 2 There arequarters in one whole.
 (a) 1 (b) 2 (c) 4 (d) 8
- 3 $9 + 6 = 10 + \dots\dots$
 (a) 5 (b) 10 (c) 4 (d) 6
- 4 Triangle has corners
 (a) 2 (b) 3 (c) 4 (d) 5
- 5 $24 + 35 = \dots\dots\dots$
 (a) 59 (b) 77 (c) 68 (d) 80
- 6 9 tens , 4 ones =
 (a) 49 (b) 94 (c) 13 (d) 15

Question 2 : Complete the following :

- 1 $81 + 6 = \dots\dots\dots$
- 2 $73 + 25 = \dots\dots\dots$
- 3 $7 - \dots \dots = 3$
- 4 $12 - \dots\dots = 4$

Question 3 : Answer the following :

- 1 Complete using (< , = or >) :
 a) $44 + 30 \dots\dots 14 + 3$
 b) $18 + 61 \dots\dots 35 + 30$

- 2 Match to make 10 .
 10 5 7 2 9 6
 4 0 5 1 8 3

3 Solve the addition problems.

$$\begin{array}{r} 24 \\ +12 \\ \hline \dots \end{array}$$

$$\begin{array}{r} 35 \\ +23 \\ \hline \dots \end{array}$$

$$\begin{array}{r} 42 \\ +37 \\ \hline \dots \end{array}$$

4 Use the digits 2 , 8 , 3 to make as many two – digit numbers as you can.

..... , , , ,



تم تحميل هذه الأوراق مجاناً من
أكبر وأضخم مكتبة تعليمية
موقع وتطبيق مذكرات جاهزة



المنقف

You Must Add Value



نموذج الاجابة

GRADE

1

2025
SECOND TERM



Model (1)

Question 1 : Choose the correct answer :

- 1) $20 \text{ L.E} + 20 \text{ L.E} + 1 \text{ L.E} + 1 \text{ L.E} = \dots\dots\dots \text{ L.E}$

(a) 60 (b) 24 (c) **42** (d) 50
- 2) The value of the digit 5 in 75 is

(a) **5** (b) 50 (c) 15 (d) 20

- 3) $8 \text{ Ones} + 2 \text{ Tens} = \dots\dots\dots$

(a) 82 (b) **28** (c) 88 (d) 90
- 4) $35 < \dots\dots$

(a) 28 (b) 34 (c) 30 (d) **40**
- 5) The smallest 2 – digit number is

(a) **10** (b) 11 (c) 12 (d) 14

Question 2 : Complete the following :

- 1) 98 , 87 , 76 , 65 , ...**54**.... , ...**43**.... , ...**32**.....
- 2) The number that comes just after 80 is**81**.....
- 3) ...**7**.... Tens + ...**2**.... Ones = 72
- 4) The smallest number that can be formed from 6 and 7 is ...**67**.....
- 5) The fraction of the shaded part is **$\frac{1}{2}$**



Question 3 : Answer the following :

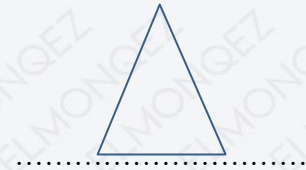
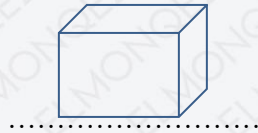
- 1) Find the result :
 - a) $25 + 32 = \dots\dots$
 - b) $86 - 12 = \dots\dots$
 - c) $95 - 25 = \dots\dots$
 - d) $56 - 26 = \dots\dots$

a) **75**
b) **74**
c) **70**
d) **30**

2 Complete using ($<$, $=$ or $>$) :

- a) 66 45
 b) 80 8 Tens
 c) 5 Ones + 4 Tens 54
 d) Seventy nine 97
 a) $>$ b) $=$ c) $<$ d) $<$

3 Write the name of each shape :



- a) *rectangle* b) *cube* c) *triangle*

Model (2)

Question 1 : Choose the correct answer :

1 $89 - 27 = \dots\dots\dots$

- a) 50 b) **62** c) 63 d) 72

2 $65 - 55 = \dots\dots\dots$

- a) **10** b) 9 c) 12 d) 11

3 $23 + 26 = \dots\dots\dots$

- a) 50 b) 52 c) **49** d) 39

4 $34 + 65 = \dots\dots\dots$

- a) 89 b) 79 c) **99** d) 100

Question 2 : Complete the following :

1 The number that comes just after 29 is ...**30**.....

2 The place value of the digit 9 in 93 is ...**Tens**.....

3 ...**3**... Ones + ...**9**... Tens = 93

4 The fraction of the shaded part in the opposite shape is ... $\frac{1}{3}$...



5 $52 - \dots$ **22** $\dots = 30$

Question 3 : Answer the following :

- 1 Complete using ($<$, $=$ or $>$) :
- a) $75 - 32 \dots\dots\dots 24 + 10$
 b) 6 Tens + 4 Ones $\dots\dots\dots$ 64
 c) $5 + 60 \dots\dots\dots 50 + 6$
 d) $20 \text{ L.E} + 5 \text{ L.E} + 1 \text{ L.E} \dots\dots\dots 62 \text{ LE}$
a) = b) = c) > d) <
- 2 Write the greatest and the smallest numbers that can be formed from the digits 3 and 5 , then find their sum :
- a) The greatest number is $\dots\dots\dots$.
 b) The smallest number is $\dots\dots\dots$.
 c) Their sum = $\dots\dots\dots + \dots\dots\dots = \dots\dots\dots$.
a) 53 b) 35 c) $53 + 35 = 88$
- 3 Nada has 68 L.E, and her sister Mona has 35 L.E. Find the difference between their money.
 The difference = $\dots\dots\dots - \dots\dots\dots = \dots\dots\dots \text{ LE}$
 $68 - 35 = 33 \text{ L.E}$

Model (3)

Question 1 : Choose the correct answer :

- 1 7 Tens + 2 Ones = $\dots\dots\dots$
- (a)** 27 **(b)** 72 **(c)** 70 **(d)** 28
- 2 $31 = 10 + \dots\dots\dots$
- (a)** 21 **(b)** 41 **(c)** 30 **(d)** 20
- 3 10 more than 35 is $\dots\dots\dots$
- (a)** 36 **(b)** 45 **(c)** 25 **(d)** 90
- 4 The number to the left of 80 is $\dots\dots\dots$
- (a)** 81 **(b)** 70 **(c)** 79 **(d)** 40
- 5 The value of the digit 8 in 78 is $\dots\dots\dots$
- (a)** 8 **(b)** 80 **(c)** 18 **(d)** 14

Question 2 : Complete the following :

- ① The number between 68 and 70 is ...**69**.....
- ② $76 \text{ L.E} = 20 \text{ L.E} + \dots 20 \text{ L.E} \dots + \dots 20 \text{ L.E} \dots + \dots 10 \text{ L.E} \dots + \dots 5 \text{ L.E} \dots + \dots 1 \text{ L.E} \dots$
- ③ The smallest 2 – different digit number is**10**.....
- ④ $5 \text{ Tens} + \dots 2 \dots \text{ Tens} = 70$
- ⑤ The opposite shape is called a**square**.....



Question 3 : Answer the following :

- ① Arrange the following numbers in a descending order :

90	19	9	99	91
----	----	---	----	----

.....,,,,

The order is **99 , 91 , 90 , 19 , 9**

- ② Sara had 78 L.E. She bought a shirt for 36 L.E. Find the remaining money with Sara.
Remaining = - = L.E.
 $78 - 36 = 42 \text{ L.E}$

- ③ From the opposite picture :
 - 1) There are hens inside the cage.
 - 2) There are hens outside the cage**1) 3 2) 2**



Model (4)


Question 1 : Choose the correct answer :

- ① 64 is one less than

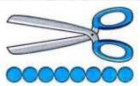


(a) 63	(b) 64	(c) 65	(d) 66
--------	--------	---------------	--------
- ② + 6 = 10

(a) 6	(b) 5	(c) 4	(d) 7
-------	-------	--------------	-------
- ③ The square has sides.

(a) 3	(b) 4	(c) 5	(d) 7
-------	--------------	-------	-------

- 4 69 L.E 74 L.E
 (a) < (b) > (c) = (d) ≥
- 5 $47 - 20 = \dots\dots\dots$
 (a) 27 (b) 37 (c) 57 (d) 14
- 6 The fraction of the shaded part  is
 (a) Half (b) Three fourths (c) Quarter (d) Third

Question 2 : Complete the following :


- 1 $13 + 54 = \dots 67 \dots$
- 2 The length of  is ...8....
- 3  The order of the boat is ...**Fourth**....
- 4 The value of the digit 7 in 76 is ...**70**....
- 5 $70 - 50 = \dots 20 \dots$
- 6 The name of the solid  is ...**cone**....

Question 3 : Answer the following :




- 1 In a bus there are 8 boys and 11 girls. How many children are in the bus?
 $8 + 11 = 19$ children
- 2 Vera has 17 pounds; she gave her brother 6 pounds. How much money with Vera now?
 $17 - 6 = 11$ pounds
- 3 Count down:
 70 , 69 , 68 , , ,
67 , 66 , 65

Model (5)

Question 1 : Choose the correct answer :

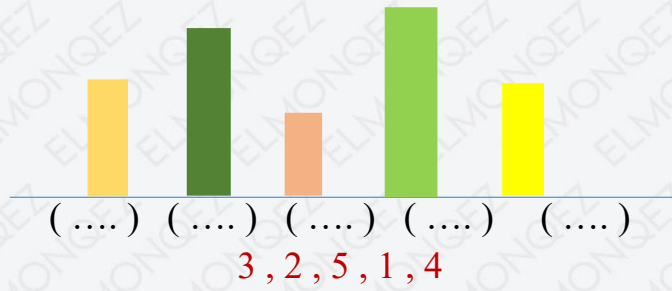
- 1 $64 < \dots\dots\dots$
 - a **71**
 - b 59
 - c 60
 - d 50
- 2 $3 \text{ Tens} + 5 \text{ Ones} = \dots\dots\dots$
 - a 50
 - b 53
 - c **35**
 - d 20
- 3 The rectangle has $\dots\dots$ corners.
 - a 5
 - b **4**
 - c 3
 - d 6
- 4 $\dots\dots\dots$ is 10 more than 18.
 - a 8
 - b **28**
 - c 80
 - d 70
- 5 $30 + 50 = \dots\dots\dots$
 - a **80**
 - b 70
 - c 90
 - d 60
- 6 The solid  is a $\dots\dots\dots$
 - a cube
 - b circle
 - c **Sphere**
 - d Cone

Question 2 : Complete the following :

- 1 7 is less than ...**10**...
- 2 $23 + 51 = \dots$ **54** $\dots\dots$
- 3 The time  is $\dots\dots$ **8** $\dots\dots$ o'clock.
- 4 $13 - \dots$ **10** $\dots\dots = 3$
- 5 The length of  is \dots **3** $\dots\dots$ 

Question 3 : Answer the following :

1 Arrange from the tallest to the shortest




2 Count down.


49, 48,, 46,,,

49, 48, 47, 46, 45, 44, 43, 43

3 Match :



Second	43
Cuboid	6 + 7
4 + 9	2 nd
40 + 3	

Ans :

Second	43
Cuboid	6 + 7
4 + 9	2 nd
40 + 3	

Model (6)

Question 1 : Choose the correct answer :

- 1 The triangle has corners.
 (a) Zero (b) 2 (c) 3 (d) 4
- 2 38 29
 (a) < (b) > (c) = (d) ≥
- 3 $40 - 10 = \dots\dots\dots$
 (a) 30 (b) 35 (c) 25 (d) 52
- 4 $20 \text{ L.E} + 20 \text{ L.E} + 1 \text{ L.E} = \dots\dots\dots \text{ L.E}$
 (a) 40 (b) 50 (c) 41 (d) 31
- 5 The name of the solid  is a
 (a) pyramid (b) sphere (c) cone (d) cuboid
- 6 The time  is o'clock
 (a) 12 (b) 11 (c) 10 (d) 9


Question 2 : Complete the following :

- 1 $58 - 45 = \dots 13 \dots$
- 2 The place value of 8 in 89 is ...Tens....
- 3 $2 \text{ tens} + 3 \text{ ones} = \dots 23 \dots$
- 4 There are ...4.. Fourths in one whole.
- 5 $4 + \dots 3 \dots = 7$
- 6 ...5... is 10 less than 15

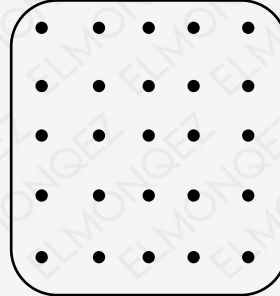
Question 3 : Answer the following :

1 Draw :

b) Triangle



b) Square



2 Hana has 45 colored marbles, she gave her sister 21 marbles. How many marbles does she have now?

$45 - 21 = 24$ marbles

3 Arrange from the greatest to the least.

38 , 52 , 17 , 45 , 20

..... , , , ,

The order is 52 , 45 , 38 , 20 , 17

Model (7)

Question 1 : Choose the correct answer :

1 74 L.E 39 L.E

a) $>$

b) $<$

c) $=$

d) \geq

2 The cat is the table.



a) inside

b) outside

c) below

d) behind

3 $7 + 8 = \dots\dots$

a) 14

b) 15

c) 16

d) 17

4 The net  shows a

- (a) **cube** (b) cuboid (c) cone (d) cylinder

5 $5 \text{ tens} + 6 \text{ ones} = \dots\dots$

- (a) **56** (b) 65 (c) 11 (d) 60

6 $10 \text{ L.E} + 10 \text{ L.E} + 5 \text{ L.E} + 1 \text{ L.E} = \dots\dots \text{ L.E}$

- (a) 35 (b) 20 (c) 25 (d) **26**

Question 2 : Complete the following :

1 The value of 4 in 34 is ...**4**..

2 $17 - \dots\mathbf{6}\dots = 11$



3 $\dots\mathbf{5}\dots \text{ tens} + \dots\dots\mathbf{3}\dots \text{ Ones}$

4 The circle has ...**zero**.. corners

5 ...**18**... is 1 more than 17

6 $38 - 25 = \dots\mathbf{13}\dots$

Question 3 : Answer the following :

1 Count down
 $85, 75, \dots\dots, 55, \dots\dots, \dots\dots$

$85, 75, 65, 55, 45, 35$

2 Join.

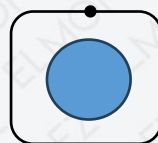
Circle

50

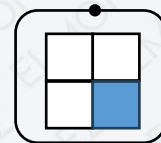
Quarter

Fifty

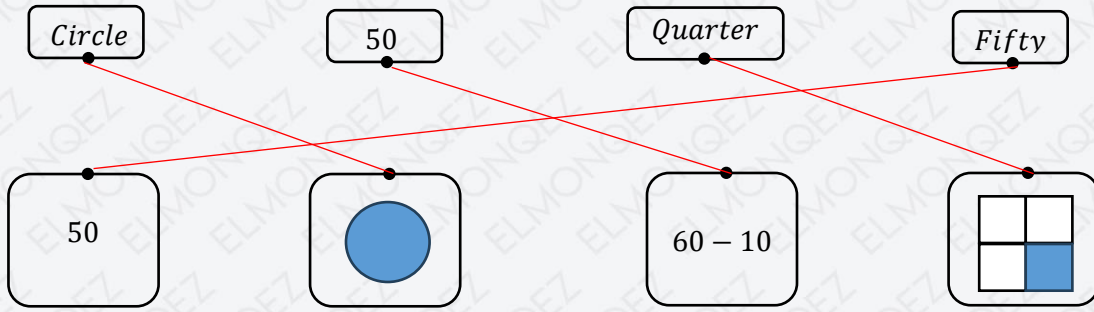
50



$60 - 10$



Ans



3 Arrange from the greatest to the least.

40 , 57 , 29 , 61 , 8

..... , , , ,

61 , 57 , 40 , 29 , 8

4 Complete using ($<$, $=$ or $>$):

a) 91 1 ten + 9 ones

b) The number of edges of a cube the number of edges of a cuboid.

c) 5 L.E + 50 L.E 20 L.E + 1L.E + 1 L.E

d) 31 + 14 90 - 40

a) $>$ b) $=$ c) $>$ d) $<$

Model (8)

Question 1 : Choose the correct answer :

1 29 L.E - 20 L.E = L.E

a) **9**

b) 40

c) 49

d) 50

2 43 <

a) **45**

b) 42

c) 39

d) 29

3 The circle has corners .

a) **0**

b) 1

c) 3

d) 4

4 6 + = 18

a) 11

b) **12**

c) 13

d) 14

5

The net  shows a

- (a) cube (b) **cone** (c) cuboid (d) cylinder

6

53 is 10 less than

- (a) **63** (b) 43 (c) 73 (d) 83

Question 2 : Complete the following :

1

The amount



is ...**75**.... L.E

2

$17 - 13 = \dots$ **4**.....

3

There are ...**3**... sides in triangle.

4

The value of 9 in the number 39 is ...**9**.....

Question 3 : Answer the following :

1

Arrange from the greatest to the least.

48 , 29 , 16 , 51 , 37

..... , , , ,

51 , 48 , 37 , 29 , 16

2

Complete.

17 $\xrightarrow{-7}$ $\xrightarrow{+3}$ $\xrightarrow{+2}$ $\xrightarrow{-4}$ _____

The missing numbers is : **10 , 13 , 15 , 11**

3

Write the missing numbers in each sequence.

a) 10, 11 , 12 , , ,

b) 15 , 25 , , , , 65

a) 13 , 14 , 15

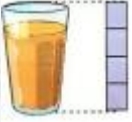





b) 35 , 45 , 55

Model (9)

Question 1 : Choose the correct answer :

- 1 35 is greater than
 (a) 39 (b) **29** (c) 45 (d) 50
- 2 $3 + \dots = 10$
 (a) 5 (b) 6 (c) **7** (d) 8
- 3 The day has hours.
 (a) 20 (b) 22 (c) **24** (d) 26
- 4 The cube has flat faces.
 (a) 12 (b) 8 (c) **6** (d) 4
- 5 $88 \text{ L.E} - 71 \text{ L.E} = \dots \text{ L.E}$
 (a) **17** (b) 18 (c) 19 (d) 20
- 6 $26 < \dots$
 (a) **62** (b) 25 (c) 20 (d) 19

Question 2 : Complete the following :

- 1 The length of  is**4**..... 
- 2  =**24**.....
- 3 The fraction of the shaded part  is ... **$\frac{2}{4}$**
- 4 The dog is ...**in**... the house. 
- 5 $9 - \dots$ **5** $= 4$
- 6 The time  is ...**3**..... o'clock

Question 3 : Answer the following :

- 1 Complete the sequence.
41 , 42 , 43 , ,
44 , 45
- 2 In a bus there are 15 boys and 20 girls. How many children in the bus?
 $15+20 = 35$ children
- 3 Reem has 45 pounds, she gave her brother 10 pounds. How much money with Reem now?
 $45 - 10 = 35$ pounds
- 4 Count down
70 , 69 , 68 , , ,
67 , 66 , 65

Model (10)

Question 1 : Choose the correct answer :

- 1 When the time is 5 o'clock , the hour hand points to

(a) 5	(b) 10	(c) 12	(d) 8
--------------	--------	--------	-------
- 2 There arequarters in one whole.

(a) 1	(b) 2	(c) 4	(d) 8
-------	-------	--------------	-------
- 3 $9 + 6 = 10 + \dots\dots$

(a) 5	(b) 10	(c) 4	(d) 6
--------------	--------	-------	-------
- 4 Triangle has corners

(a) 2	(b) 3	(c) 4	(d) 5
-------	--------------	-------	-------
- 5 $24 + 35 = \dots\dots\dots$

(a) 59	(b) 77	(c) 68	(d) 80
---------------	--------	--------	--------
- 6 9 tens , 4 ones =

(a) 49	(b) 94	(c) 13	(d) 15
--------	---------------	--------	--------

Question 2 : Complete the following :

- 1 $81 + 6 = \dots\dots\dots$ **87**.....
- 2 $73 + 25 = \dots\dots$ **98**.....

3 $7 - \dots 4 \dots = 3$

4 $12 - \dots 8 \dots = 4$

Question 3 : Answer the following :

1 Complete using ($<$, $=$ or $>$) :

a) $44 + 30 \dots 14 + 3$

b) $18 + 61 \dots 35 + 30$

a) $>$ b) $>$

2 Match to make 10 .

10 5 7 2 9 6

4 0 5 1 8 3

10 5 7 2 9 6
4 0 5 1 8 3

3 Solve the addition problems.

$$\begin{array}{r} 24 \\ +12 \\ \hline \dots \end{array}$$

36

$$\begin{array}{r} 35 \\ +23 \\ \hline \dots \end{array}$$

58

$$\begin{array}{r} 42 \\ +37 \\ \hline \dots \end{array}$$

79

4 Use the digits 2 , 8 , 3 to make as many two – digit numbers as you can.

..... , , , ,

28 , 83 , 32 , 38 , 23